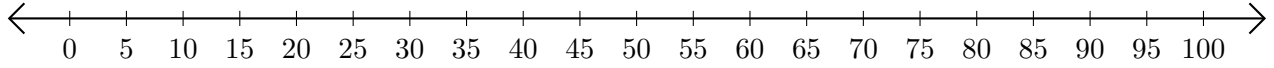


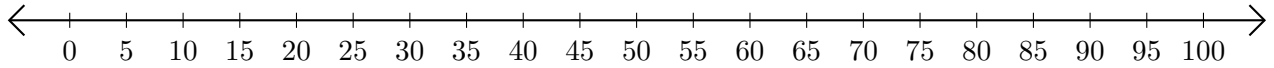
Opérations sur Une Droite Graduée (I)

Utilisez la droite graduée pour calculer chaque somme ou différence.

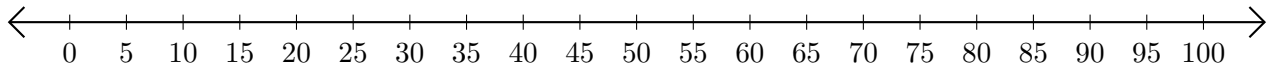
1. $20 + 60 = \underline{\quad}$



2. $100 - 90 = \underline{\quad}$



3. $30 + 45 = \underline{\quad}$



4. $40 - 5 = \underline{\quad}$



5. $40 + 40 = \underline{\quad}$

