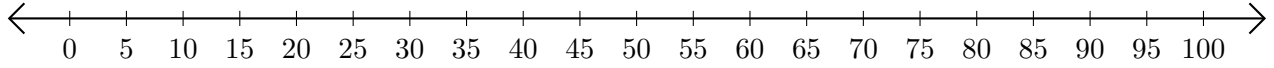


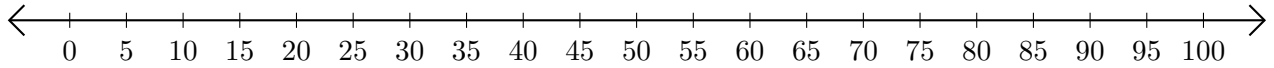
# Opérations sur Une Droite Graduée (A)

Utilisez la droite graduée pour calculer chaque somme ou différence.

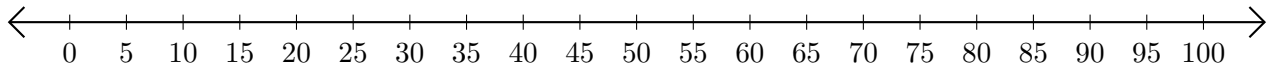
1.  $20 + 45 = \underline{\quad}$



2.  $60 - 35 = \underline{\quad}$



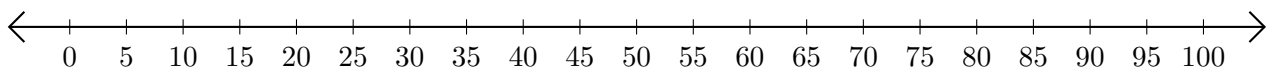
3.  $30 + 40 = \underline{\quad}$



4.  $100 - 95 = \underline{\quad}$



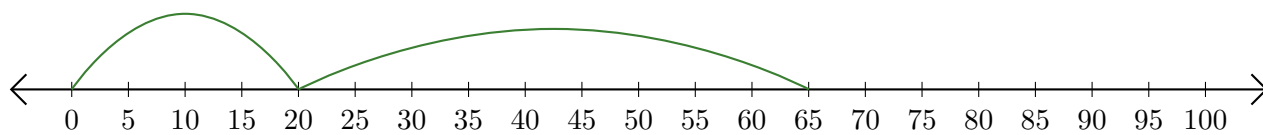
5.  $50 - 45 = \underline{\quad}$



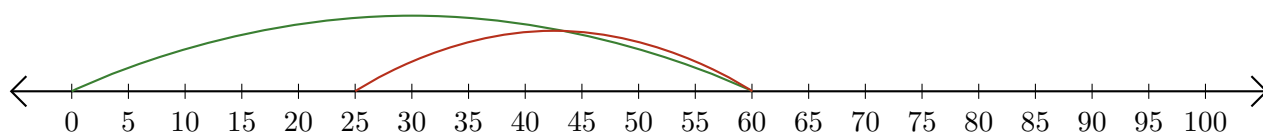
# Opérations sur Une Droite Graduée (A) Réponses

Utilisez la droite graduée pour calculer chaque somme ou différence.

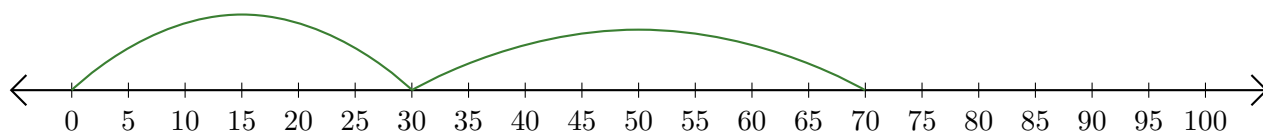
1.  $20 + 45 = \underline{65}$



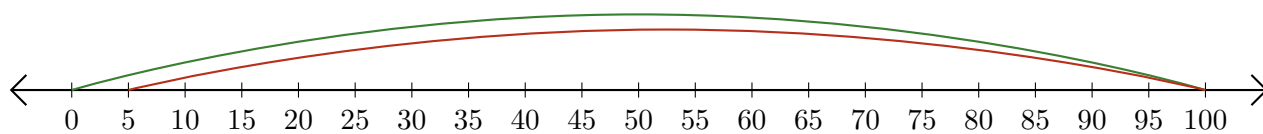
2.  $60 - 35 = \underline{25}$



3.  $30 + 40 = \underline{70}$



4.  $100 - 95 = \underline{5}$



5.  $50 - 45 = \underline{5}$

