



Comptage par Bonds de 11 (A)

Remplissez les champs vides.



11




22




—




—



—



—




77



—



—



110



—



—



—



154



—



—



—



—



209



—




—



—



253



—



—



—



—



308




—




—

Comptage par Bonds de 11 (A) Réponses

Remplissez les champs vides.



11




22



33




44



55



66




77



88



99



110



121



132



143



154



165



176



187



198



209



220



231



242



253



264



275




286



297



308



319




330

Comptage par Bonds de 11 (8)

Remplissez les champs vides.



11




22



—



—



55



—



—



—



—



—



—



132



—



—



—



176



—



—



—



—



—



—



—



—



—



—



—



—




—




330

Comptage par Bonds de 11 (8) Réponses

Remplissez les champs vides.



11




22




33




44



55



66




77



88



99



110



121



132



143



154



165



176




187



198




209



220



231



242



253



264



275



286



297



308




319




330

Comptage par Bonds de 11 (6)

Remplissez les champs vides.



11




22



—




44



55



—




—



—



—



—



—



132



—



—



—



176



—



198



—




220




—



—



—



—



—



—



—



—




—




—

Comptage par Bonds de 11 (6) Réponses

Remplissez les champs vides.



11




22



33




44



55



66




77



88



99



110



121



132



143



154



165



176



187



198



209



220



231



242



253



264



275




286



297



308



319




330

Comptage par Bonds de 11 (∞)


Remplissez les champs vides.



11




—



33



—



—



—



—



—



—



—



121



—



—



—



165



—



187



—



—



220



—



242



—



—



275




—



—



—



—




—

Comptage par Bonds de 11 (11) Réponses

Remplissez les champs vides.



11




22



33



44



55



66




77



88



99



110



121



132



143



154



165



176




187



198



209



220



231



242



253



264



275



286



297



308




319




330

Comptage par Bonds de 11 (E)

Remplissez les champs vides.



11




—




—




—



—



—




—



—



—



—



—



132



—



—



—



—



187



—



—



—




—



—



—



—



—



—



297



—



—




—

Comptage par Bonds de 11 (E) Réponses


Remplissez les champs vides.



11




22



33



44



55



66



77



88



99



110



121



132



143



154



165



176



187



198



209



220



231



242



253



264



275



286



297



308




319




330

Comptage par Bonds de 11 (F)


Remplissez les champs vides.



11




—



33



—



—



66



—



—



—



110



—



—



—



154



165



—



—



—



—



—



—



—



253



—



275



—



297



—



—




—

Comptage par Bonds de 11 (F) Réponses


Remplissez les champs vides.



11



22




33




44



55



66




77



88



99



110



121



132



143



154



165



176



187



198




209



220



231



242



253



264



275



286



297



308



319




330

Comptage par Bonds de 11 (G)


Remplissez les champs vides.



11




—



33



44



—



—



—



—



—



—



—



132



—



—



165



—



—



—



—



—



—



—



—



264



—



—



—



—




—




—

Comptage par Bonds de 11 (G) Réponses

Remplissez les champs vides.



11




22



33




44



55



66




77



88



99



110



121



132



143



154



165



176



187



198



209



220



231



242



253



264



275



286



297



308



319




330

Comptage par Bonds de 11 (A)


Remplissez les champs vides.



11




—




—



—



55



66




—



—



—



—



121



—



—



—



—



—



—



198



209



—



—



—



—



264



—




286



—



—




—




—

Comptage par Bonds de 11 (H) Réponses

Remplissez les champs vides.



11




22



33



44



55



66




77



88



99



110



121



132



143



154



165



176




187



198



209



220



231



242



253



264



275



286



297



308




319




330

Comptage par Bonds de 11 (7)

Remplissez les champs vides.




11




—




33




—



—



—




77



—



—



110



121



132



143



—



165



—



—



—



—



—




—



—



253



—



—



286



—



308



319




—

Comptage par Bonds de 11 (7) Réponses


Remplissez les champs vides.



11




22



33




44



55



66




77



88



99



110



121



132



143



154



165



176



187



198



209



220



231



242



253



264



275




286



297



308




319




330

Comptage par Bonds de 11 (I)

Remplissez les champs vides.



11




22



—




44



—



—




—



—



—



—



—



—



—




—



—



—



—



—



209




—




—



242



—



—



—



—



297



—




—




—

Comptage par Bonds de 11 (I) Réponses

Remplissez les champs vides.



11




22




33




44



55



66




77



88



99



110



121



132



143



154



165



176




187



198




209



220



231



242



253



264



275



286



297



308



319



330