



Comptage par Bonds de 11 (A)


Remplissez les champs vides.



11




22




—




—



—



—




77



—



—



110



—



—



—



154



—



—



—



—



209



—



—



—



253



—



—



—



—



308




—




—

Comptage par Bonds de 11 (A) Réponses

Remplissez les champs vides.




11




22



33




44



55



66




77



88



99



110



121



132



143



154



165



176



187



198



209




220



231




242



253



264



275



286



297



308



319



330