


Comptage par Bonds de 100 (A)

Remplissez les champs vides.

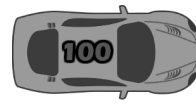



100




200
















900



1000







1300













1900









2300

















Comptage par Bonds de 100 (A) Réponses

Remplissez les champs vides.



100




200



300




400



500



600




700



800




900



1000



1100



1200



1300



1400



1500



1600



1700



1800



1900



2000



2100



2200



2300



2400



2500



2600



2700



2800




2900




3000

Comptage par Bonds de 100 (S)

Remplissez les champs vides.




100






















1000



1100



1200







1500

















2300

















Comptage par Bonds de 100 (100) Réponses


Remplissez les champs vides.



100




200



300




400




500



600




700



800



900



1000



1100



1200



1300



1400



1500



1600



1700



1800



1900



2000



2100



2200



2300



2400



2500



2600



2700



2800




2900




3000

Comptage par Bonds de 100 (P)


Remplissez les champs vides.

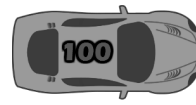


100




200






400













900





1100



















2000







2300












2800






Comptage par Bonds de 100 (6) Réponses

Remplissez les champs vides.



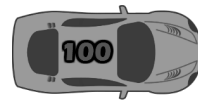
100




200



300




400




500



600




700



800



900



1000



1100



1200



1300



1400



1500



1600



1700



1800



1900



2000



2100



2200



2300



2400



2500



2600



2700



2800



2900




3000

Comptage par Bonds de 100 (2)

Remplissez les champs vides.




100



200








500




600





800













1400




1500



1600









2000






















Comptage par Bonds de 100 (100) Réponses

Remplissez les champs vides.



100




200



300




400




500



600




700



800




900




1000



1100



1200



1300



1400



1500



1600



1700



1800



1900



2000



2100



2200



2300



2400



2500



2600



2700



2800




2900



3000

Comptage par Bonds de 100 (£)

Remplissez les champs vides.




100








400



500






700









1100





1300





































Comptage par Bonds de 100 (€) Réponses

Remplissez les champs vides.



100




200



300




400



500



600




700



800




900



1000



1100



1200



1300



1400



1500



1600



1700



1800



1900



2000



2100



2200



2300



2400



2500



2600



2700



2800




2900




3000

Comptage par Bonds de 100 (F)

Remplissez les champs vides.




100


















800



















1700

















2500








2800






Comptage par Bonds de 100 (F) Réponses


Remplissez les champs vides.



100




200



300




400




500



600




700



800



900



1000



1100



1200



1300



1400



1500



1600



1700



1800



1900



2000



2100



2200



2300



2400



2500



2600



2700



2800



2900



3000

Comptage par Bonds de 100 (G)

Remplissez les champs vides.



100









600















1400









1800





2000







2300



2400










2800






Comptage par Bonds de 100 (G) Réponses

Remplissez les champs vides.



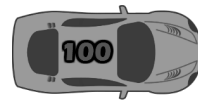
100




200



300




400




500



600




700



800



900



1000



1100



1200



1300



1400



1500



1600



1700



1800



1900



2000



2100



2200



2300



2400



2500



2600



2700



2800




2900




3000

Comptage par Bonds de 100 (A)

Remplissez les champs vides.




100



















900











1400













2000









2400










2800





Comptage par Bonds de 100 (H) Réponses

Remplissez les champs vides.



100




200



300




400




500



600




700



800




900




1000



1100



1200



1300



1400



1500



1600



1700



1800



1900



2000



2100



2200



2300



2400



2500



2600



2700



2800




2900



3000

Comptage par Bonds de 100 (7)

Remplissez les champs vides.




100








400
















1100



1200





1400



1500

































Comptage par Bonds de 100 (7) Réponses

Remplissez les champs vides.



100




200



300




400



500



600




700



800




900



1000



1100



1200



1300



1400



1500



1600



1700



1800



1900



2000



2100



2200



2300



2400



2500



2600



2700



2800




2900




3000

Comptage par Bonds de 100 (I)

Remplissez les champs vides.




100




















900







1200









1600









2000









2400















3000

Comptage par Bonds de 100 (I) Réponses


Remplissez les champs vides.



100




200



300




400




500



600




700



800



900



1000



1100



1200



1300



1400



1500



1600



1700



1800



1900



2000



2100



2200



2300



2400



2500



2600



2700



2800



2900



3000