



# Comptage par Bonds de 100 (P)

Remplissez les champs vides.



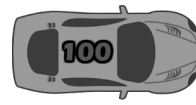
100




200



\_\_\_



400




\_\_\_



\_\_\_



\_\_\_



\_\_\_



900



\_\_\_



1100



\_\_\_



\_\_\_



\_\_\_



\_\_\_



\_\_\_



\_\_\_



\_\_\_



\_\_\_



2000



\_\_\_



\_\_\_



2300



\_\_\_



\_\_\_



\_\_\_



\_\_\_



2800




\_\_\_




\_\_\_

# Comptage par Bonds de 100 (6) Réponses


Remplissez les champs vides.



100




200



300




400



500



600




700



800



900



1000



1100




1200



1300



1400



1500



1600



1700



1800



1900



2000



2100



2200



2300



2400



2500



2600



2700



2800



2900



3000