

Facteurs Premiers (G)

Utilisez un diagramme à branches pour trouver les facteurs premiers des nombres suivants.

234

182

108

208

112

208

54

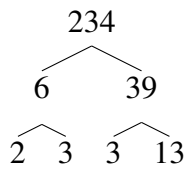
225

159

Facteurs Premiers (G) Solutions

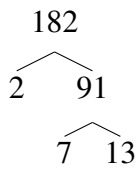
Utilisez un diagramme à branches pour trouver les facteurs premiers des nombres suivants.

234



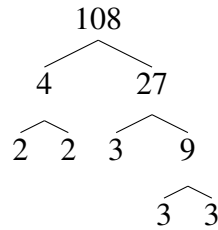
$$234 = 2 \times 3^2 \times 13$$

182



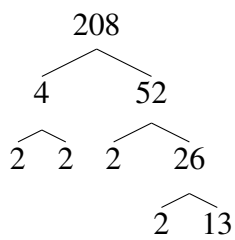
$$182 = 2 \times 7 \times 13$$

108



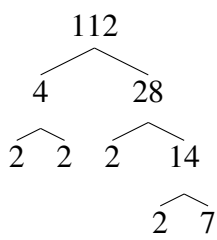
$$108 = 2^2 \times 3^3$$

208



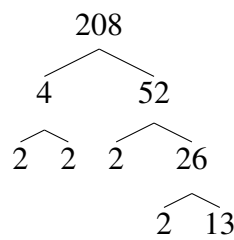
$$208 = 2^4 \times 13$$

112



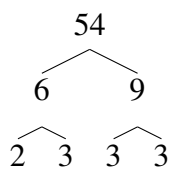
$$112 = 2^4 \times 7$$

208



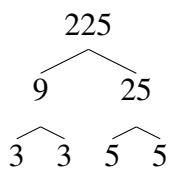
$$208 = 2^4 \times 13$$

54



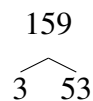
$$54 = 2 \times 3^3$$

225



$$225 = 3^2 \times 5^2$$

159



$$159 = 3 \times 53$$