

Facteurs Premiers (E)

Utilisez un diagramme à branches pour trouver les facteurs premiers des nombres suivants.

119

237

225

144

177

126

159

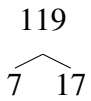
118

154

Facteurs Premiers (E) Solutions

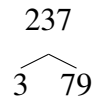
Utilisez un diagramme à branches pour trouver les facteurs premiers des nombres suivants.

119



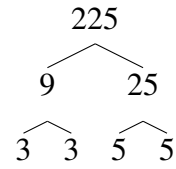
$$119 = 7 \times 17$$

237



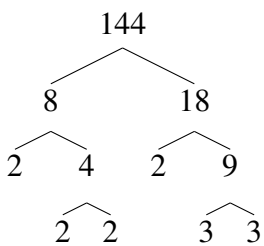
$$237 = 3 \times 79$$

225



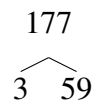
$$225 = 3^2 \times 5^2$$

144



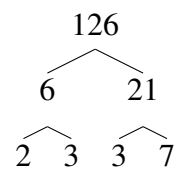
$$144 = 2^4 \times 3^2$$

177



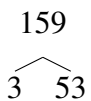
$$177 = 3 \times 59$$

126



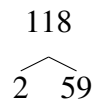
$$126 = 2 \times 3^2 \times 7$$

159



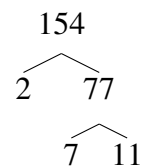
$$159 = 3 \times 53$$

118



$$118 = 2 \times 59$$

154



$$154 = 2 \times 7 \times 11$$