

Facteurs Premiers (F)

Utilisez un diagramme à branches pour trouver les facteurs premiers des nombres suivants.

144

174

188

156

48

63

125

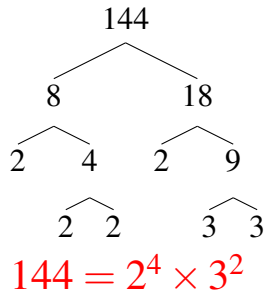
169

168

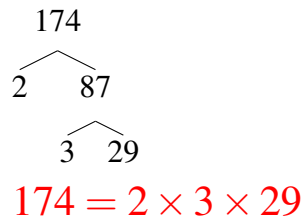
Facteurs Premiers (F) Solutions

Utilisez un diagramme à branches pour trouver les facteurs premiers des nombres suivants.

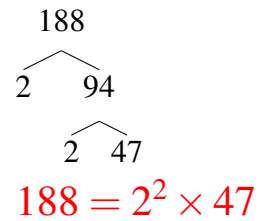
144



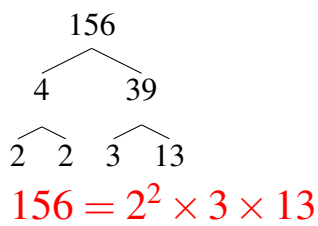
174



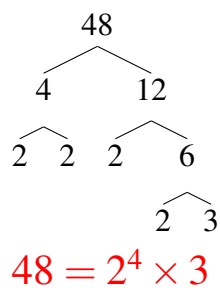
188



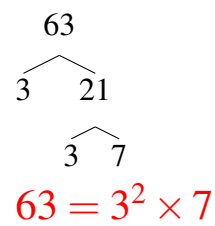
156



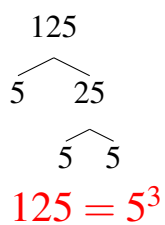
48



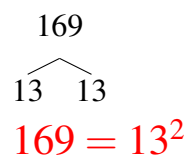
63



125



169



168

