

Facteurs Premiers (J)

Utilisez un diagramme à branches pour trouver les facteurs premiers des nombres suivants.

16

39

24

33

12

90

22

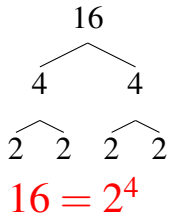
81

33

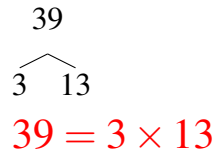
Facteurs Premiers (J) Solutions

Utilisez un diagramme à branches pour trouver les facteurs premiers des nombres suivants.

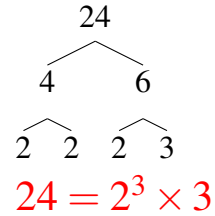
16



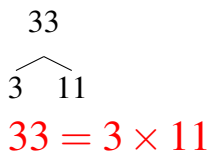
39



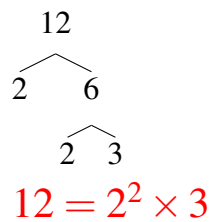
24



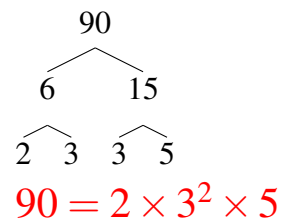
33



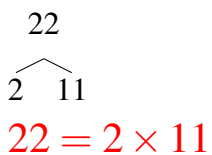
12



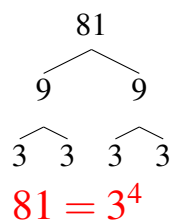
90



22



81



33

