

Facteurs Premiers (A)

Utilisez un diagramme à branches pour trouver les facteurs premiers des nombres suivants.

28

30

21

21

48

48

20

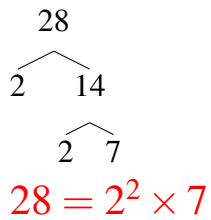
16

20

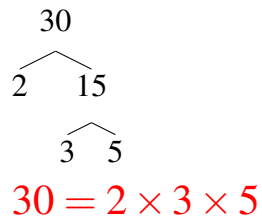
Facteurs Premiers (A) Solutions

Utilisez un diagramme à branches pour trouver les facteurs premiers des nombres suivants.

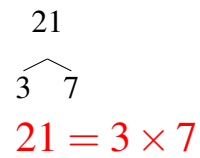
28



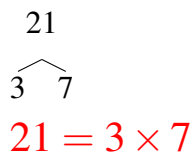
30



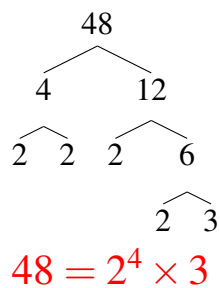
21



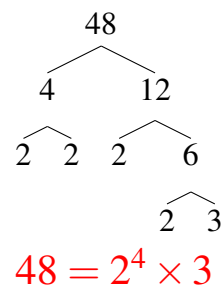
21



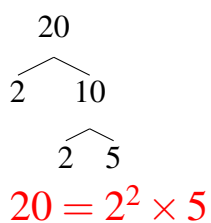
48



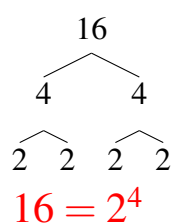
48



20



16



20

