





















Addition de Cœurs Doux (B)

Quelle est la valeur de chaque cœur doux?

64	+		=	114			+	79	=	119
44	+		=	89			+	31	=	87
65	+		=	163			+	91	=	151
52	+		=	70			+	72	=	116
76	+		=	107			+	97	=	173
10	+		=	70			+	16	=	105
41	+		=	134			+	68	=	126
96	+		=	116			+	76	=	167
81	+		=	96			+	77	=	162
75	+		=	124			+	24	=	101

Joyeuse Saint Valentin de la part Mathslibres.com!