














































# QU'EST-CE QUE LE CADEAU? (A)

Quel nombre se trouve dans chaque cadeau?

5 × 4 = 	3 × 8 = 	6 × 2 = 
2 × 6 = 	6 × 8 = 	3 × 3 = 
3 × 7 = 	8 × 5 = 	7 × 3 = 
4 × 3 = 	2 × 7 = 	6 × 5 = 
4 × 2 = 	3 × 5 = 	2 × 2 = 
6 ×  = 24	5 ×  = 15	6 ×  = 42
3 ×  = 24	5 ×  = 35	8 ×  = 40
8 ×  = 40	8 ×  = 16	7 ×  = 49
7 ×  = 56	8 ×  = 16	5 ×  = 10
5 ×  = 30	7 ×  = 14	2 ×  = 4
 × 8 = 40	 × 2 = 16	 × 2 = 16
 × 8 = 16	 × 6 = 30	 × 6 = 18
 × 5 = 15	 × 7 = 21	 × 4 = 28
 × 8 = 48	 × 5 = 20	 × 6 = 12
 × 6 = 36	 × 2 = 6	 × 6 = 30

# QU'EST-CE QUE LE CADEAU? (A) SOLUTIONS

Quel nombre se trouve dans chaque cadeau?

5	×	4	=	20	3	×	8	=	24	6	×	2	=	12
2	×	6	=	12	6	×	8	=	48	3	×	3	=	9
3	×	7	=	21	8	×	5	=	40	7	×	3	=	21
4	×	3	=	12	2	×	7	=	14	6	×	5	=	30
4	×	2	=	8	3	×	5	=	15	2	×	2	=	4
6	×	4	=	24	5	×	3	=	15	6	×	7	=	42
3	×	8	=	24	5	×	7	=	35	8	×	5	=	40
8	×	5	=	40	8	×	2	=	16	7	×	7	=	49
7	×	8	=	56	8	×	2	=	16	5	×	2	=	10
5	×	6	=	30	7	×	2	=	14	2	×	2	=	4
5	×	8	=	40	8	×	2	=	16	8	×	2	=	16
2	×	8	=	16	5	×	6	=	30	3	×	6	=	18
3	×	5	=	15	3	×	7	=	21	7	×	4	=	28
6	×	8	=	48	4	×	5	=	20	2	×	6	=	12
6	×	6	=	36	3	×	2	=	6	5	×	6	=	30