














































# QU'EST-CE QUE LE CADEAU? (I)

Quel nombre se trouve dans chaque cadeau?

3 × 2 = 	5 × 7 = 	5 × 6 = 
4 × 3 = 	4 × 2 = 	5 × 6 = 
5 × 3 = 	2 × 6 = 	4 × 3 = 
2 × 6 = 	5 × 5 = 	5 × 5 = 
7 × 2 = 	4 × 3 = 	5 × 3 = 
4 ×  = 12	7 ×  = 14	3 ×  = 21
2 ×  = 6	5 ×  = 10	4 ×  = 16
4 ×  = 8	6 ×  = 30	4 ×  = 28
6 ×  = 18	7 ×  = 14	6 ×  = 18
5 ×  = 10	2 ×  = 10	7 ×  = 49
 × 4 = 12	 × 4 = 12	 × 5 = 10
 × 6 = 24	 × 7 = 28	 × 4 = 24
 × 5 = 25	 × 5 = 25	 × 4 = 16
 × 6 = 30	 × 3 = 9	 × 2 = 6
 × 3 = 12	 × 3 = 6	 × 2 = 10

# QU'EST-CE QUE LE CADEAU? (I) SOLUTIONS

Quel nombre se trouve dans chaque cadeau?

3	×	2	=	6	5	×	7	=	35	5	×	6	=	30
4	×	3	=	12	4	×	2	=	8	5	×	6	=	30
5	×	3	=	15	2	×	6	=	12	4	×	3	=	12
2	×	6	=	12	5	×	5	=	25	5	×	5	=	25
7	×	2	=	14	4	×	3	=	12	5	×	3	=	15
4	×	3	=	12	7	×	2	=	14	3	×	7	=	21
2	×	3	=	6	5	×	2	=	10	4	×	4	=	16
4	×	2	=	8	6	×	5	=	30	4	×	7	=	28
6	×	3	=	18	7	×	2	=	14	6	×	3	=	18
5	×	2	=	10	2	×	5	=	10	7	×	7	=	49
3	×	4	=	12	3	×	4	=	12	2	×	5	=	10
4	×	6	=	24	4	×	7	=	28	6	×	4	=	24
5	×	5	=	25	5	×	5	=	25	4	×	4	=	16
5	×	6	=	30	3	×	3	=	9	3	×	2	=	6
4	×	3	=	12	2	×	3	=	6	5	×	2	=	10