













































QU'EST-CE QUE LE CADEAU? (H)

Quel nombre se trouve dans chaque cadeau?

| | | |
|---|---|---|
| 7 + 10 =  | 4 + 5 =  | 2 + 20 =  |
| 21 + 7 =  | 16 + 6 =  | 23 + 9 =  |
| 7 + 24 =  | 14 + 18 =  | 10 + 18 =  |
| 18 + 8 =  | 6 + 3 =  | 2 + 17 =  |
| 8 + 11 =  | 25 + 23 =  | 12 + 22 =  |
| 16 +  = 38 | 3 +  = 9 | 23 +  = 39 |
| 15 +  = 28 | 16 +  = 19 | 4 +  = 13 |
| 5 +  = 11 | 15 +  = 31 | 4 +  = 8 |
| 3 +  = 25 | 8 +  = 13 | 25 +  = 37 |
| 14 +  = 29 | 25 +  = 32 | 21 +  = 39 |
|  + 21 = 23 |  + 19 = 24 |  + 9 = 29 |
|  + 3 = 14 |  + 17 = 38 |  + 23 = 39 |
|  + 25 = 33 |  + 10 = 23 |  + 21 = 23 |
|  + 19 = 25 |  + 22 = 28 |  + 2 = 17 |
|  + 23 = 33 |  + 20 = 45 |  + 23 = 29 |