





QU'EST-CE QUE LE CADEAU? (F)

Quel nombre se trouve dans chaque cadeau?

7 + 17 = 	20 + 8 = 	11 + 25 = 
18 + 10 = 	12 + 15 = 	19 + 2 = 
5 + 5 = 	9 + 20 = 	4 + 25 = 
7 + 25 = 	4 + 4 = 	24 + 25 = 
5 + 16 = 	3 + 14 = 	21 + 8 = 
16 +  = 33	23 +  = 29	21 +  = 43
15 +  = 20	19 +  = 36	2 +  = 22
12 +  = 15	7 +  = 23	10 +  = 32
8 +  = 32	10 +  = 15	8 +  = 27
17 +  = 42	23 +  = 31	11 +  = 35
 + 3 = 7	 + 15 = 34	 + 16 = 34
 + 21 = 44	 + 5 = 10	 + 9 = 29
 + 7 = 18	 + 22 = 27	 + 12 = 32
 + 13 = 15	 + 21 = 34	 + 21 = 30
 + 6 = 22	 + 20 = 23	 + 17 = 40