














































QU'EST-CE QUE LE CADEAU? (F)

Quel nombre se trouve dans chaque cadeau?

4 + 4 = 	8 + 8 = 	7 + 5 = 
6 + 2 = 	6 + 5 = 	8 + 2 = 
9 + 2 = 	8 + 6 = 	4 + 9 = 
4 + 2 = 	6 + 8 = 	4 + 3 = 
4 + 5 = 	7 + 3 = 	9 + 2 = 
3 +  = 5	2 +  = 9	9 +  = 17
3 +  = 7	5 +  = 7	9 +  = 15
2 +  = 10	2 +  = 9	7 +  = 10
7 +  = 12	6 +  = 10	2 +  = 7
9 +  = 14	5 +  = 7	9 +  = 18
 + 8 = 17	 + 8 = 16	 + 8 = 15
 + 3 = 7	 + 7 = 15	 + 8 = 17
 + 2 = 6	 + 5 = 9	 + 2 = 8
 + 8 = 12	 + 9 = 18	 + 5 = 12
 + 8 = 10	 + 4 = 12	 + 2 = 6

QU'EST-CE QUE LE CADEAU? (F) SOLUTIONS

Quel nombre se trouve dans chaque cadeau?

$4 + 4 = 8$

$6 + 2 = 8$

$9 + 2 = 11$

$4 + 2 = 6$

$4 + 5 = 9$

$3 + 2 = 5$

$3 + 4 = 7$

$2 + 8 = 10$

$7 + 5 = 12$

$9 + 5 = 14$

$9 + 8 = 17$

$4 + 3 = 7$

$4 + 2 = 6$

$4 + 8 = 12$

$2 + 8 = 10$

$8 + 8 = 16$

$6 + 5 = 11$

$8 + 6 = 14$

$6 + 8 = 14$

$7 + 3 = 10$

$2 + 7 = 9$

$5 + 2 = 7$

$2 + 7 = 9$

$6 + 4 = 10$

$5 + 2 = 7$

$8 + 8 = 16$

$8 + 7 = 15$

$4 + 5 = 9$

$9 + 9 = 18$

$8 + 4 = 12$

$7 + 5 = 12$

$8 + 2 = 10$

$4 + 9 = 13$

$4 + 3 = 7$

$9 + 2 = 11$

$9 + 8 = 17$

$9 + 6 = 15$

$7 + 3 = 10$

$2 + 5 = 7$

$9 + 9 = 18$

$7 + 8 = 15$

$9 + 8 = 17$

$6 + 2 = 8$

$7 + 5 = 12$

$4 + 2 = 6$