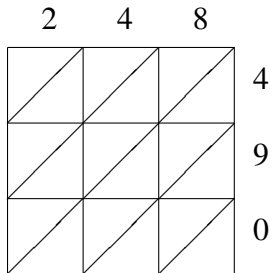
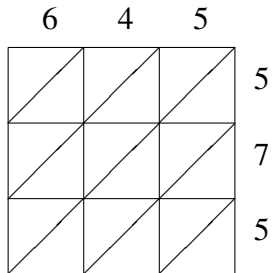


Méthode de Multiplication par Treillis (F)

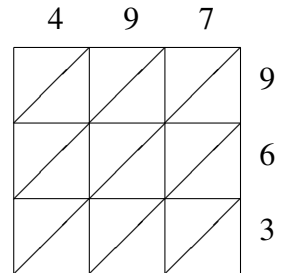
Utilisez la méthode de multiplication par treillis pour trouver chaque produit.



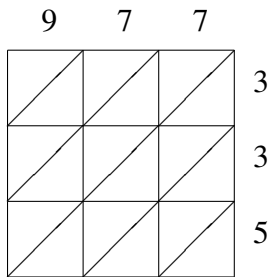
$248 \times 490 = \underline{\hspace{2cm}}$



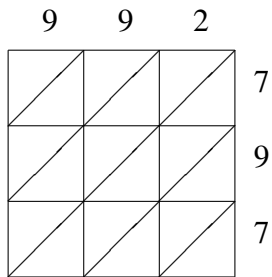
$645 \times 575 = \underline{\hspace{2cm}}$



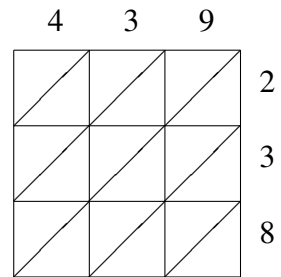
$497 \times 963 = \underline{\hspace{2cm}}$



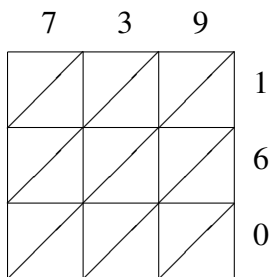
$977 \times 335 = \underline{\hspace{2cm}}$



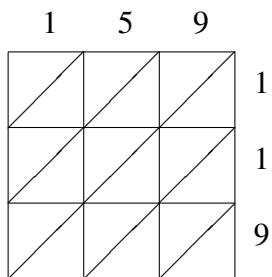
$992 \times 797 = \underline{\hspace{2cm}}$



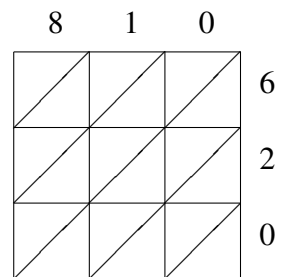
$439 \times 238 = \underline{\hspace{2cm}}$



$739 \times 160 = \underline{\hspace{2cm}}$



$159 \times 119 = \underline{\hspace{2cm}}$



$810 \times 620 = \underline{\hspace{2cm}}$