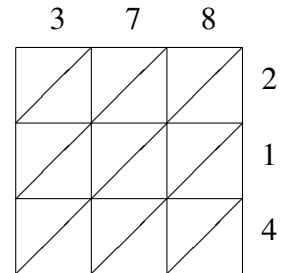
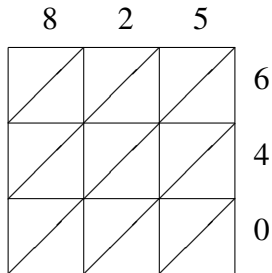
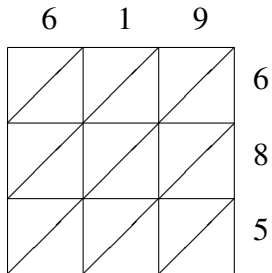


# Méthode de Multiplication par Treillis (A)

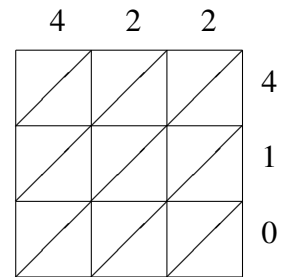
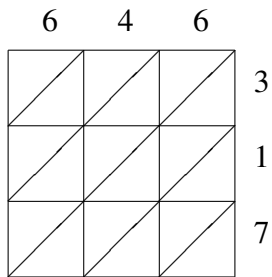
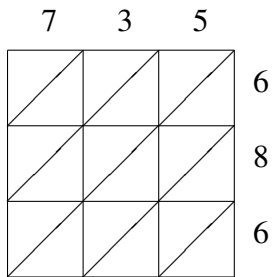
Utilisez la méthode de multiplication par treillis pour trouver chaque produit.



$619 \times 685 = \underline{\hspace{2cm}}$

$825 \times 640 = \underline{\hspace{2cm}}$

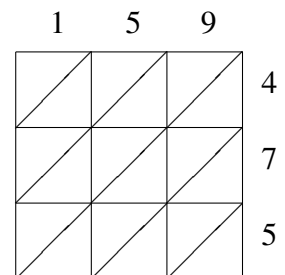
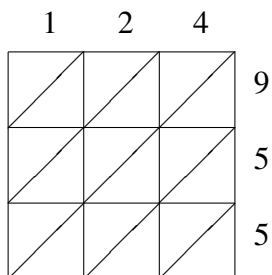
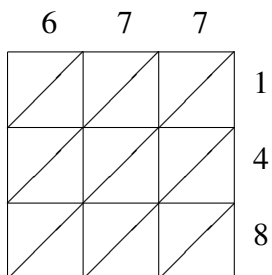
$378 \times 214 = \underline{\hspace{2cm}}$



$735 \times 686 = \underline{\hspace{2cm}}$

$646 \times 317 = \underline{\hspace{2cm}}$

$422 \times 410 = \underline{\hspace{2cm}}$



$677 \times 148 = \underline{\hspace{2cm}}$

$124 \times 955 = \underline{\hspace{2cm}}$

$159 \times 475 = \underline{\hspace{2cm}}$