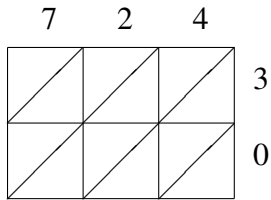
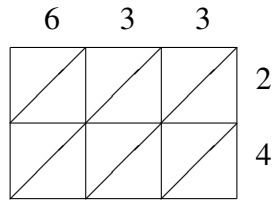


# Méthode de Multiplication par Treillis (A)

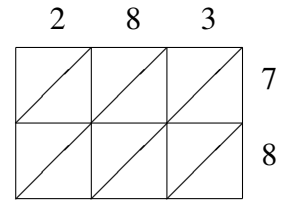
Utilisez la méthode de multiplication par treillis pour trouver chaque produit.



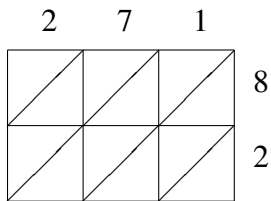
$724 \times 30 = \underline{\hspace{2cm}}$



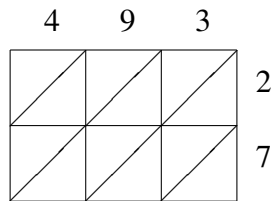
$633 \times 24 = \underline{\hspace{2cm}}$



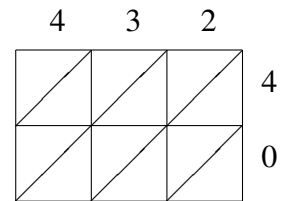
$283 \times 78 = \underline{\hspace{2cm}}$



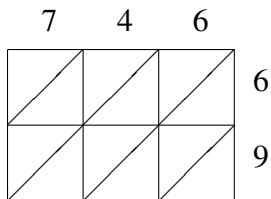
$271 \times 82 = \underline{\hspace{2cm}}$



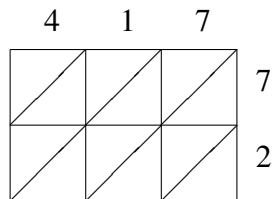
$493 \times 27 = \underline{\hspace{2cm}}$



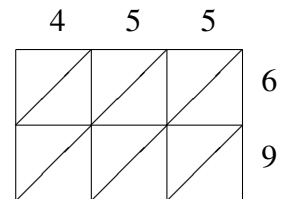
$432 \times 40 = \underline{\hspace{2cm}}$



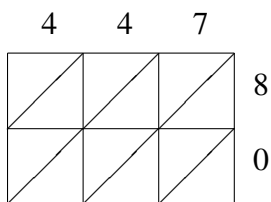
$746 \times 69 = \underline{\hspace{2cm}}$



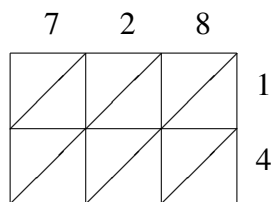
$417 \times 72 = \underline{\hspace{2cm}}$



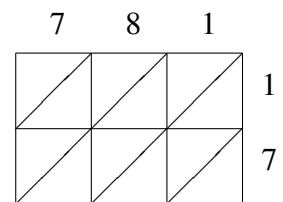
$455 \times 69 = \underline{\hspace{2cm}}$



$447 \times 80 = \underline{\hspace{2cm}}$



$728 \times 14 = \underline{\hspace{2cm}}$



$781 \times 17 = \underline{\hspace{2cm}}$