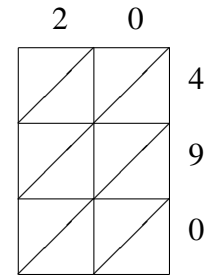
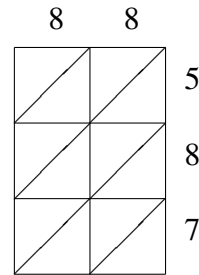
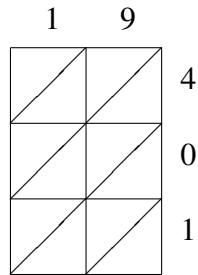
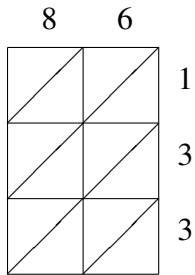
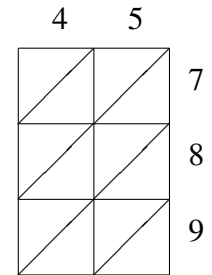
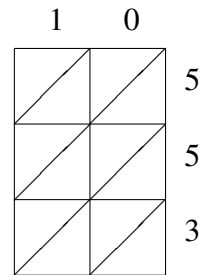
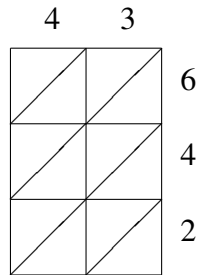
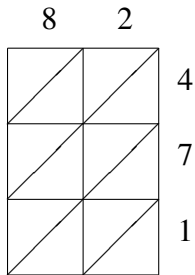


Méthode de Multiplication par Treillis (F)

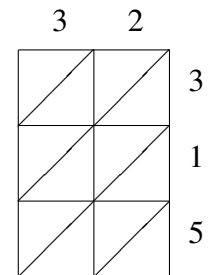
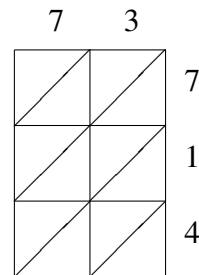
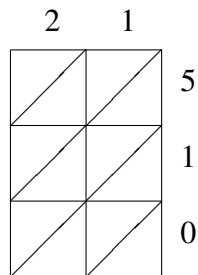
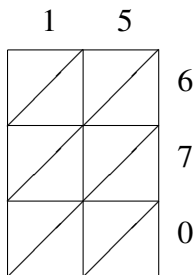
Utilisez la méthode de multiplication par treillis pour trouver chaque produit.



$$86 \times 133 = 19 \times 401 = \underline{\hspace{2cm}} \quad 88 \times 587 = 20 \times 490 = \underline{\hspace{2cm}}$$



$$82 \times 471 = 43 \times 642 = 10 \times 553 = \underline{\hspace{2cm}} \quad 45 \times 789 = \underline{\hspace{2cm}}$$



$$15 \times 670 = 21 \times 510 = 73 \times 714 = 32 \times 315 = \underline{\hspace{2cm}}$$