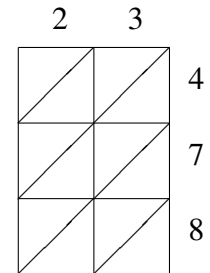
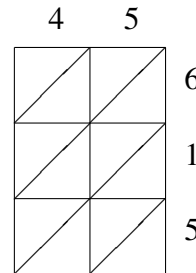
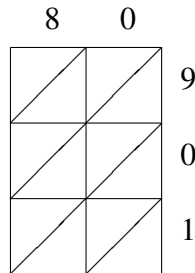
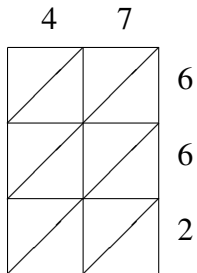
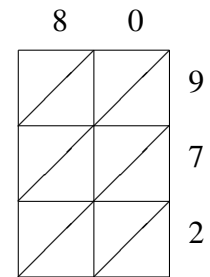
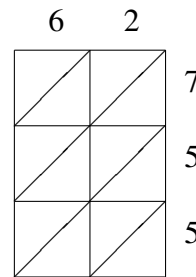
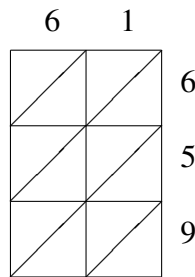
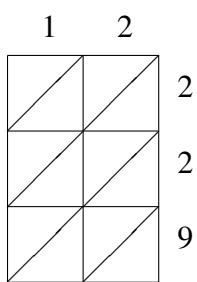


Méthode de Multiplication par Treillis (E)

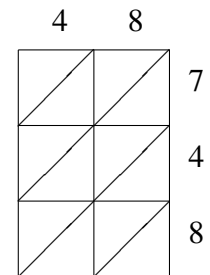
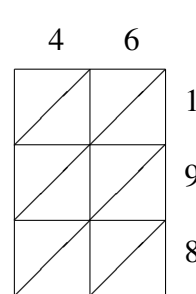
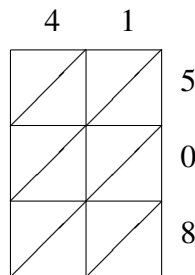
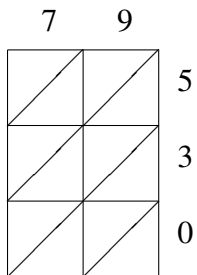
Utilisez la méthode de multiplication par treillis pour trouver chaque produit.



$47 \times 662 =$ _____
 $80 \times 901 =$ _____
 $45 \times 615 =$ _____
 $23 \times 478 =$ _____



$12 \times 229 =$ _____
 $61 \times 659 =$ _____
 $62 \times 755 =$ _____
 $80 \times 972 =$ _____



$79 \times 530 =$ _____
 $41 \times 508 =$ _____
 $46 \times 198 =$ _____
 $48 \times 748 =$ _____