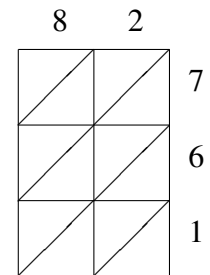
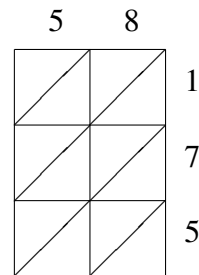
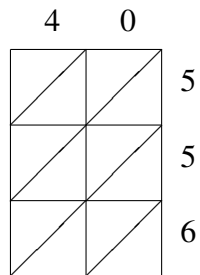
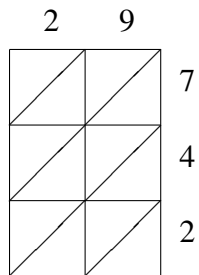


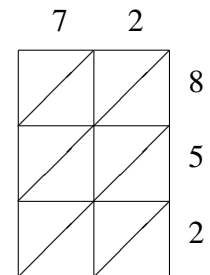
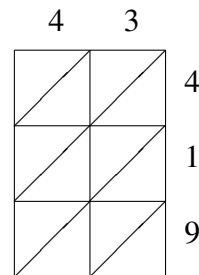
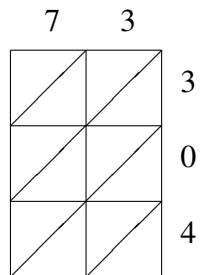
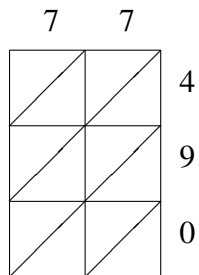
# Méthode de Multiplication par Treillis (D)

Utilisez la méthode de multiplication par treillis pour trouver chaque produit.



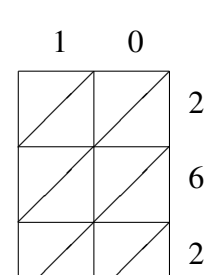
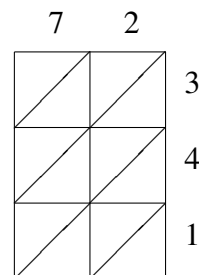
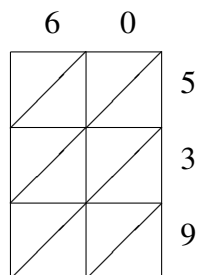
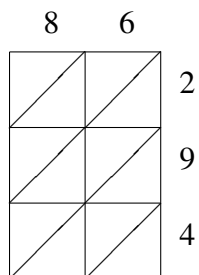
$$29 \times 742 = 40 \times 556 = 58 \times 175 = 82 \times 761 =$$

\_\_\_\_\_



$$77 \times 490 = 73 \times 304 = 43 \times 419 = 72 \times 852 =$$

\_\_\_\_\_



$$86 \times 294 = 60 \times 539 = 72 \times 341 = 10 \times 262 =$$

\_\_\_\_\_