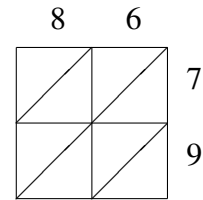
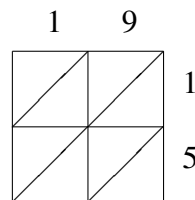
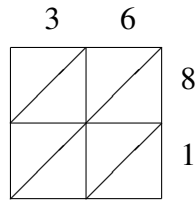
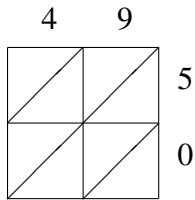


# Méthode de Multiplication par Treillis (C)

Utilisez la méthode de multiplication par treillis pour trouver chaque produit.

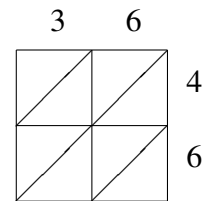
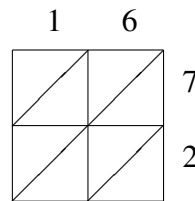
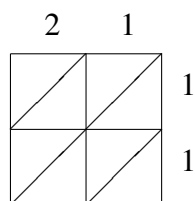
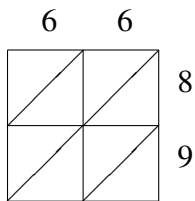


$49 \times 50 = \underline{\hspace{2cm}}$

$36 \times 81 = \underline{\hspace{2cm}}$

$19 \times 15 = \underline{\hspace{2cm}}$

$86 \times 79 = \underline{\hspace{2cm}}$

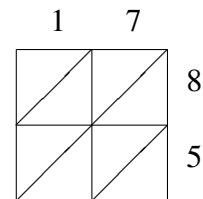
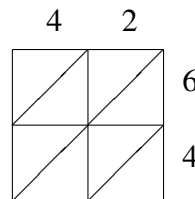
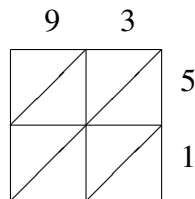
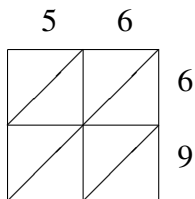


$66 \times 89 = \underline{\hspace{2cm}}$

$21 \times 11 = \underline{\hspace{2cm}}$

$16 \times 72 = \underline{\hspace{2cm}}$

$36 \times 46 = \underline{\hspace{2cm}}$

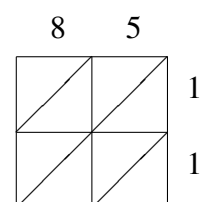
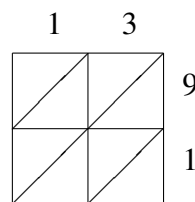
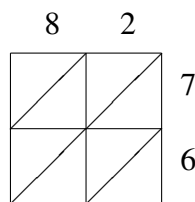
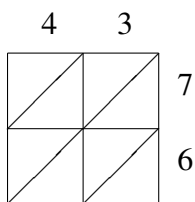


$56 \times 69 = \underline{\hspace{2cm}}$

$93 \times 51 = \underline{\hspace{2cm}}$

$42 \times 64 = \underline{\hspace{2cm}}$

$17 \times 85 = \underline{\hspace{2cm}}$



$43 \times 76 = \underline{\hspace{2cm}}$

$82 \times 76 = \underline{\hspace{2cm}}$

$13 \times 91 = \underline{\hspace{2cm}}$

$85 \times 11 = \underline{\hspace{2cm}}$