



Compte de Pièces de Monnaie (I)



Quelle est la valeur totale de chaque collection de pièces de monnaie?

1.




= ?

2.



= ?

3.



= ?

Images de pièces de monnaie provenant de la Monnaie des États-Unis