



Compte de Pièces de Monnaie (I)


Quelle est la valeur totale de chaque collection de pièces de monnaie?

1.




= ?

2.



= ?

3.





= ?

Images de pièces de monnaie provenant de la Monnaie des États-Unis

Compte de Pièces de Monnaie (I) Solutions



Quelle est la valeur totale de chaque collection de pièces de monnaie?

1.




= \$2.63

2.



= \$1.63

3.



= \$1.33

Images de pièces de monnaie provenant de la Monnaie des États-Unis