



# Compte de Pièces de Monnaie (F)


Quelle est la valeur totale de chaque collection de pièces de monnaie?

1.




= ?

2.



= ?

3.




= ?

Images de pièces de monnaie provenant de la Monnaie des États-Unis

# Compte de Pièces de Monnaie (F) Solutions


Quelle est la valeur totale de chaque collection de pièces de monnaie?

1.




= \$1.98

2.



= \$2.23

3.



= \$1.42

Images de pièces de monnaie provenant de la Monnaie des États-Unis