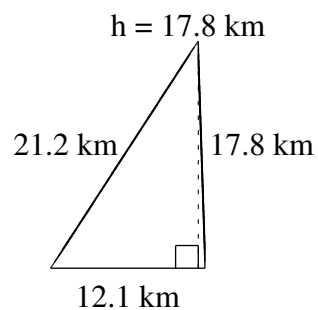
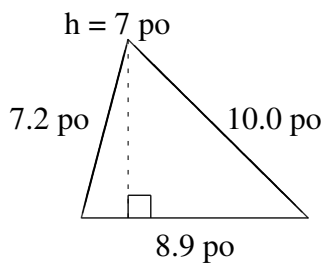
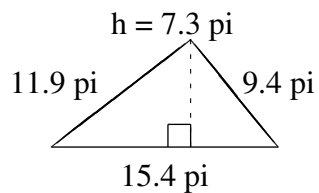
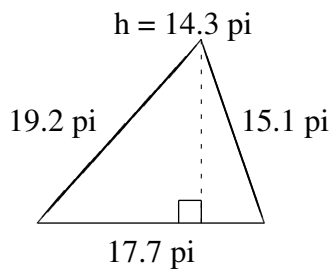
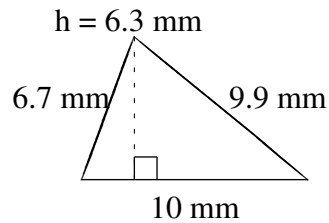
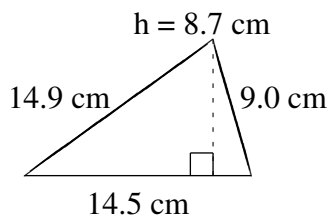


Aire et Périmètre de Triangles (I)

Trouvez l'aire et le périmètre de chaque triangle.



Aire et Périmètre de Triangles (I) Solutions

Trouvez l'aire et le périmètre de chaque triangle.

