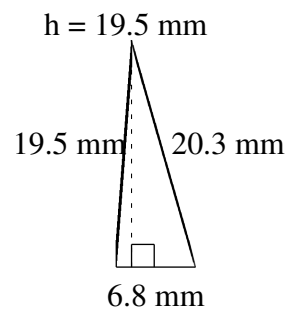
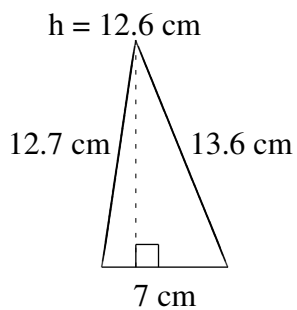
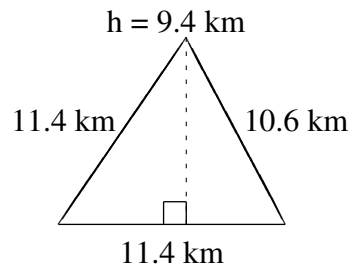
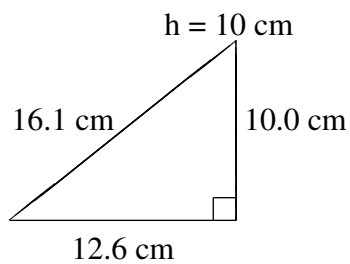
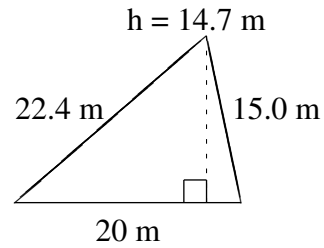
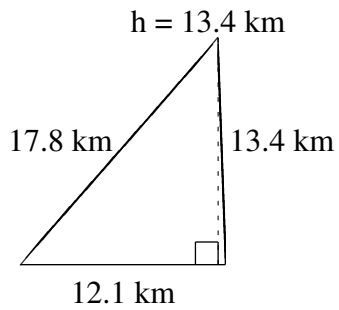


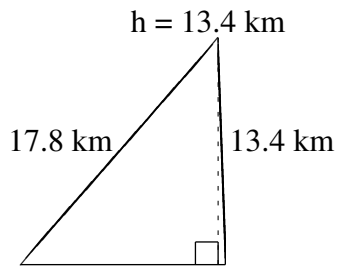
Aire et Périmètre de Triangles (B)

Trouvez l'aire et le périmètre de chaque triangle.

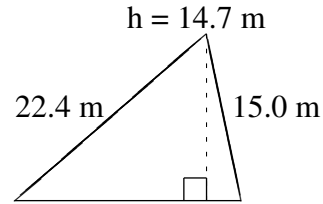


Aire et Périmètre de Triangles (B) Solutions

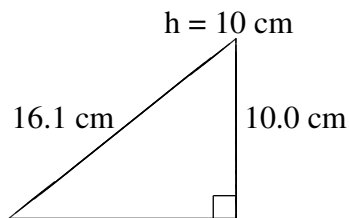
Trouvez l'aire et le périmètre de chaque triangle.



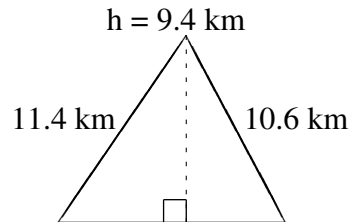
$$A = 81.07 \text{ km}^2$$
$$P = 43.3 \text{ km}$$



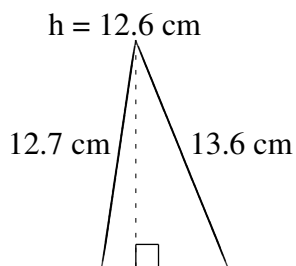
$$A = 147.0 \text{ m}^2$$
$$P = 57.4 \text{ m}$$



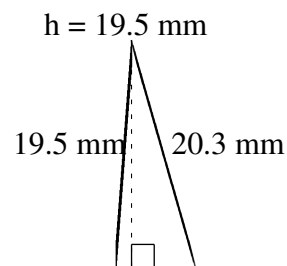
$$A = 63.0 \text{ cm}^2$$
$$P = 38.7 \text{ cm}$$



$$A = 53.58 \text{ km}^2$$
$$P = 33.4 \text{ km}$$



$$A = 44.1 \text{ cm}^2$$
$$P = 33.3 \text{ cm}$$



$$A = 66.30 \text{ mm}^2$$
$$P = 46.6 \text{ mm}$$