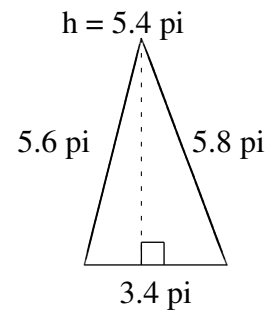
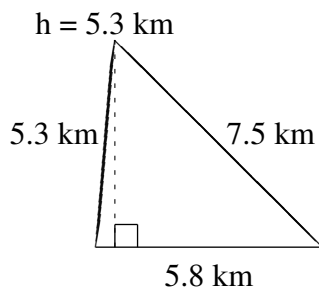
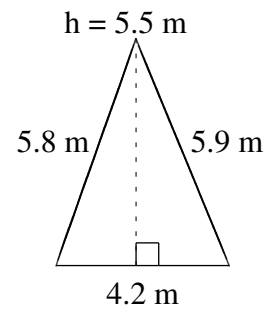
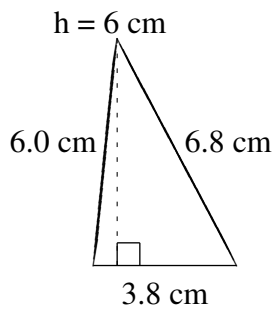
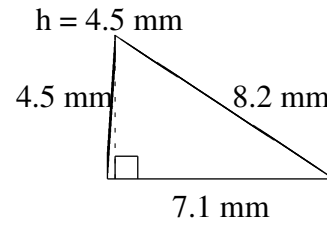
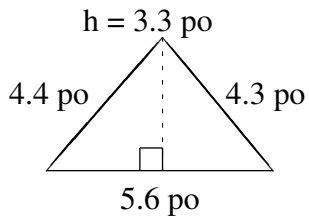


# Aire et Périmètre de Triangles (J)

Trouvez l'aire et le périmètre de chaque triangle.



# Aire et Périmètre de Triangles (J) Solutions

Trouvez l'aire et le périmètre de chaque triangle.

