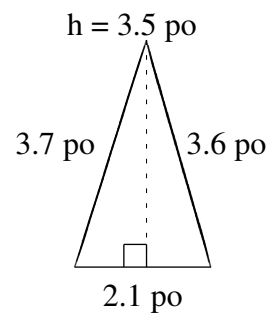
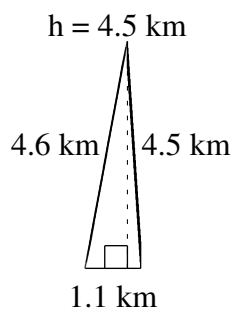
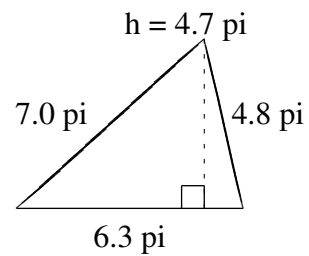
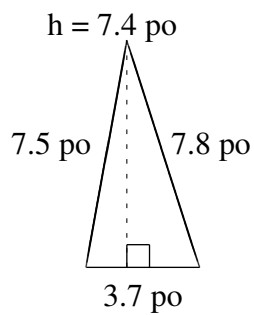
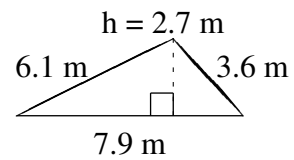
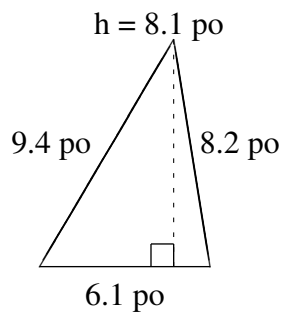


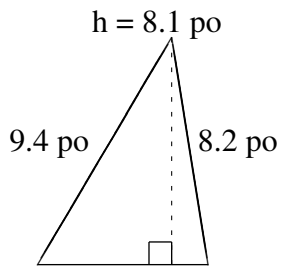
Aire et Périmètre de Triangles (C)

Trouvez l'aire et le périmètre de chaque triangle.

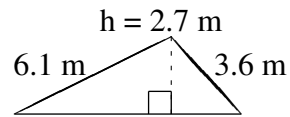


Aire et Périmètre de Triangles (C) Solutions

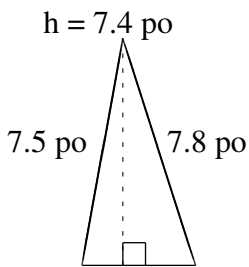
Trouvez l'aire et le périmètre de chaque triangle.



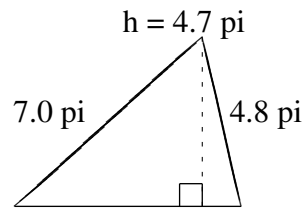
$$A = 24.705 \text{ po}^2$$
$$P = 23.7 \text{ po}$$



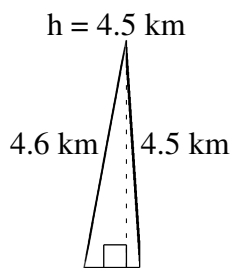
$$A = 10.665 \text{ m}^2$$
$$P = 17.6 \text{ m}$$



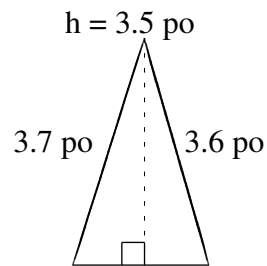
$$A = 13.69 \text{ po}^2$$
$$P = 19.0 \text{ po}$$



$$A = 14.805 \text{ pi}^2$$
$$P = 18.1 \text{ pi}$$



$$A = 2.475 \text{ km}^2$$
$$P = 10.2 \text{ km}$$



$$A = 3.675 \text{ po}^2$$
$$P = 9.4 \text{ po}$$