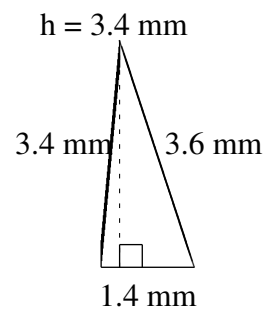
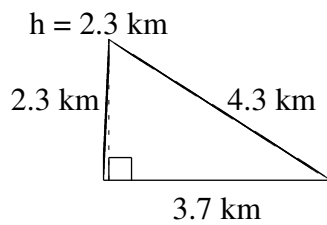
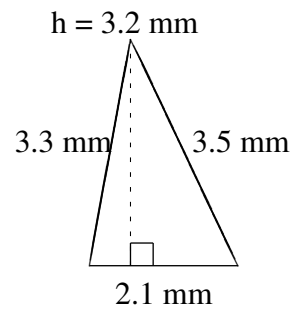
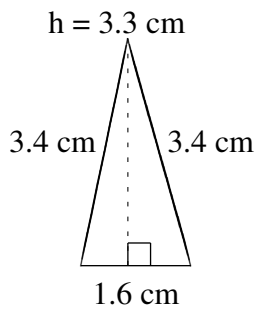
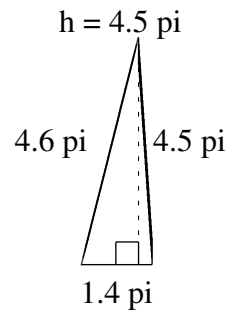
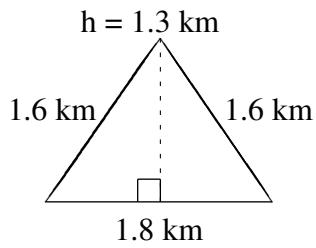


Aire et Périmètre de Triangles (E)

Trouvez l'aire et le périmètre de chaque triangle.



Aire et Périmètre de Triangles (E) Solutions

Trouvez l'aire et le périmètre de chaque triangle.

