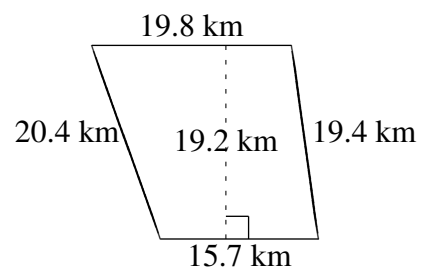
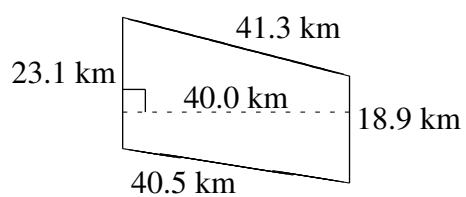
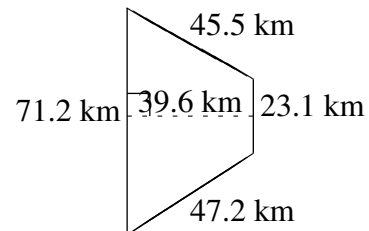
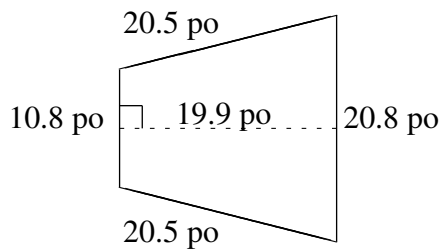
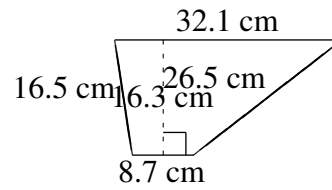
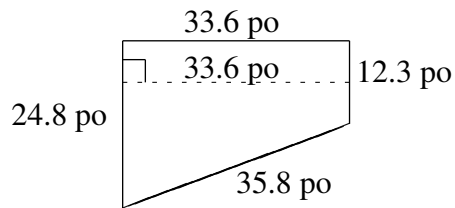


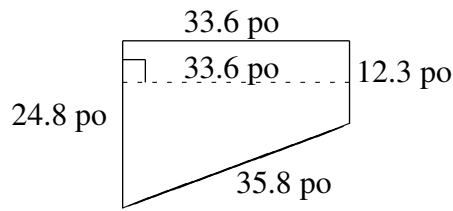
Aire et Périmètre de Trapèzes (I)

Trouvez l'aire et le périmètre de chaque trapèze.



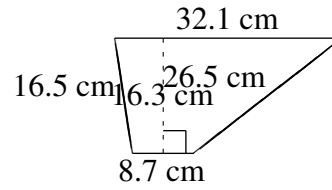
Aire et Périmètre de Trapèzes (I) Solutions

Trouvez l'aire et le périmètre de chaque trapèze.



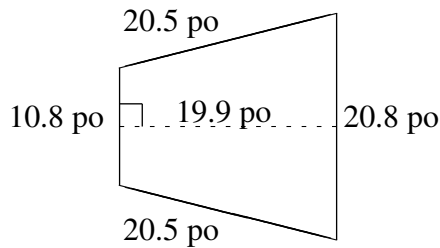
$$A = 623.28 \text{ po}^2$$

$$P = 106.5 \text{ po}$$



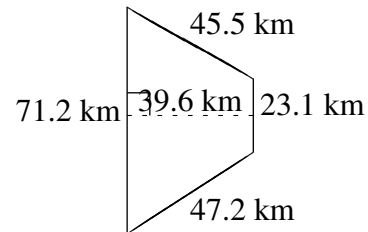
$$A = 332.52 \text{ cm}^2$$

$$P = 83.8 \text{ cm}$$



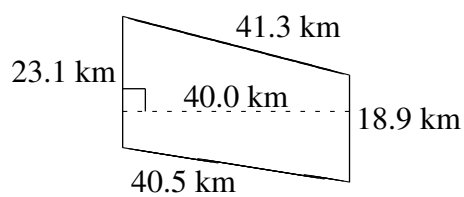
$$A = 314.42 \text{ po}^2$$

$$P = 72.6 \text{ po}$$



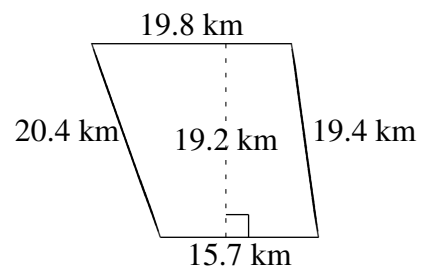
$$A = 1867.14 \text{ km}^2$$

$$P = 187.0 \text{ km}$$



$$A = 840.00 \text{ km}^2$$

$$P = 123.8 \text{ km}$$



$$A = 340.80 \text{ km}^2$$

$$P = 75.3 \text{ km}$$