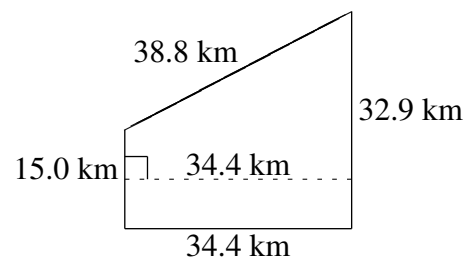
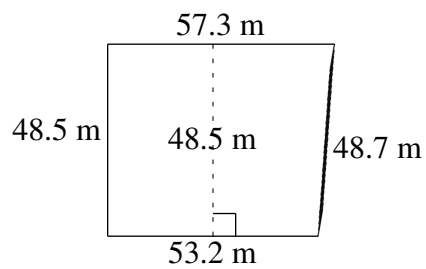
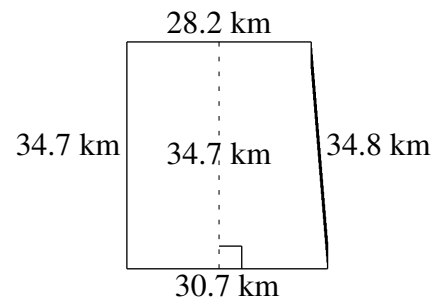
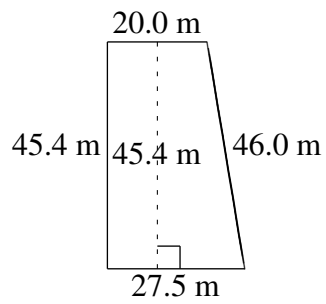
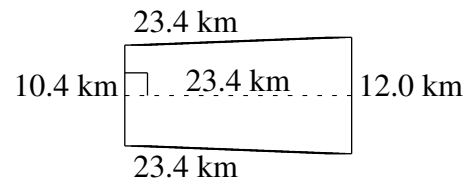
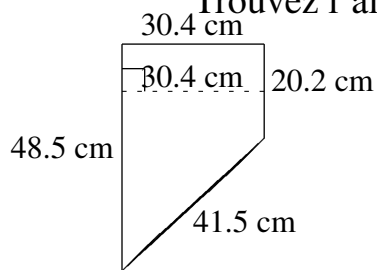


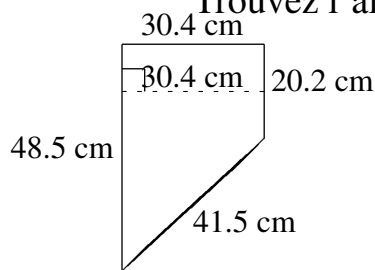
Aire et Périmètre de Trapèzes (D)

Trouvez l'aire et le périmètre de chaque trapèze.

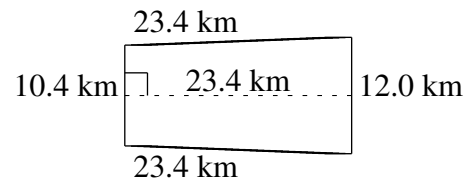


Aire et Périmètre de Trapèzes (D) Solutions

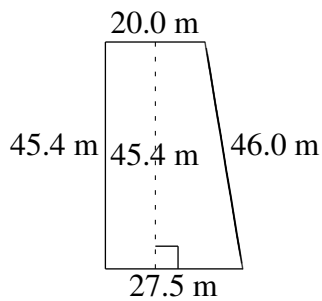
Trouvez l'aire et le périmètre de chaque trapèze.



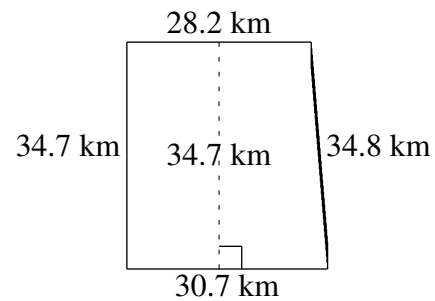
$A = 1044.24 \text{ cm}^2$
 $P = 140.6 \text{ cm}$



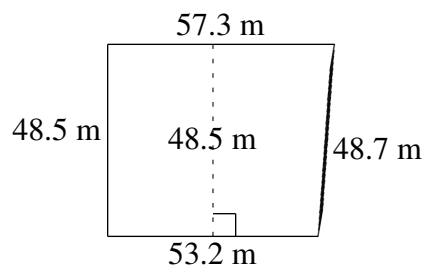
$A = 262.08 \text{ km}^2$
 $P = 69.2 \text{ km}$



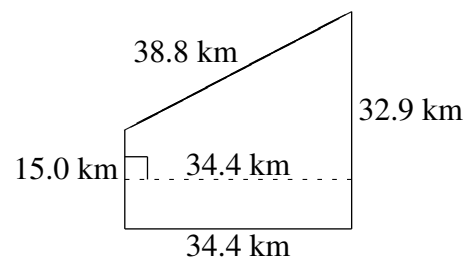
$A = 1078.25 \text{ m}^2$
 $P = 138.9 \text{ m}$



$A = 1021.915 \text{ km}^2$
 $P = 128.4 \text{ km}$



$A = 2679.625 \text{ m}^2$
 $P = 207.7 \text{ m}$



$A = 823.88 \text{ km}^2$
 $P = 121.1 \text{ km}$