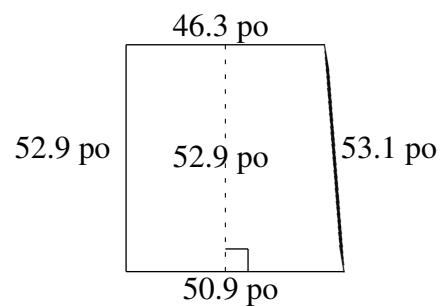
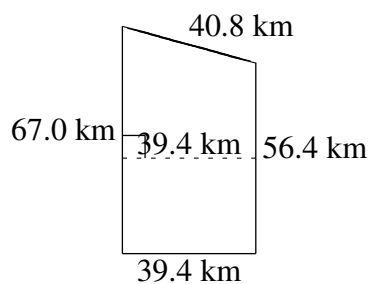
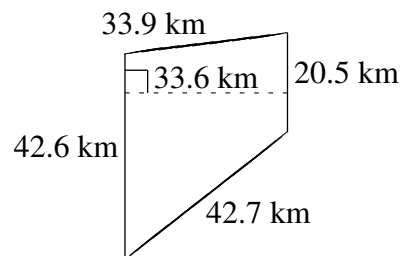
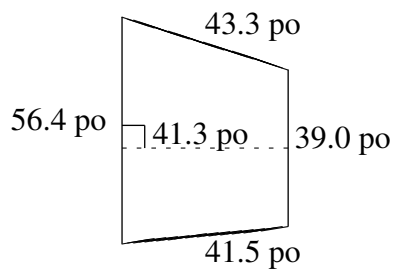
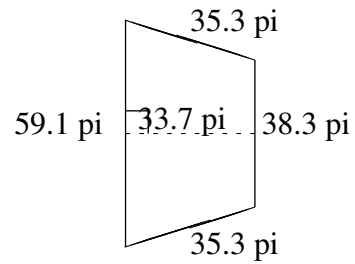
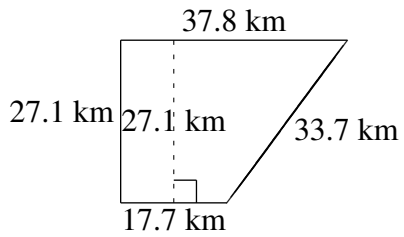


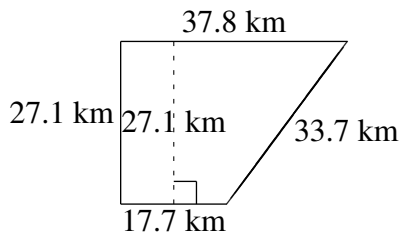
Aire et Périmètre de Trapèzes (C)

Trouvez l'aire et le périmètre de chaque trapèze.

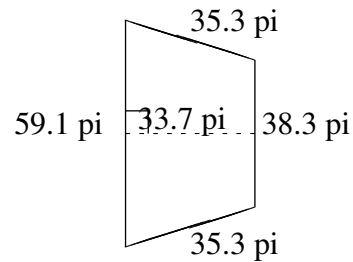


Aire et Périmètre de Trapèzes (C) Solutions

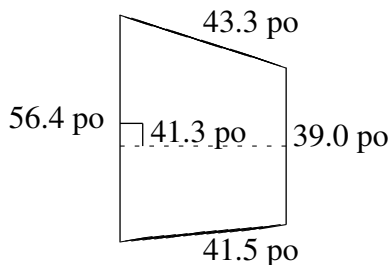
Trouvez l'aire et le périmètre de chaque trapèze.



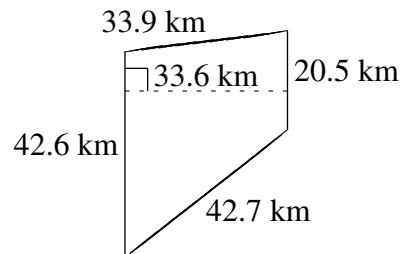
$A = 752.025 \text{ km}^2$
 $P = 116.3 \text{ km}$



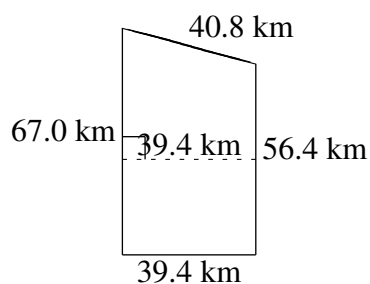
$A = 1641.19 \text{ pi}^2$
 $P = 168.0 \text{ pi}$



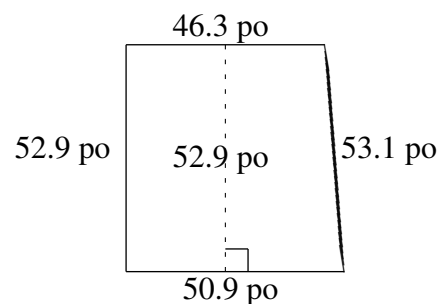
$A = 1970.01 \text{ po}^2$
 $P = 180.2 \text{ po}$



$A = 1060.08 \text{ km}^2$
 $P = 139.7 \text{ km}$



$A = 2430.98 \text{ km}^2$
 $P = 203.6 \text{ km}$



$A = 2570.94 \text{ po}^2$
 $P = 203.2 \text{ po}$