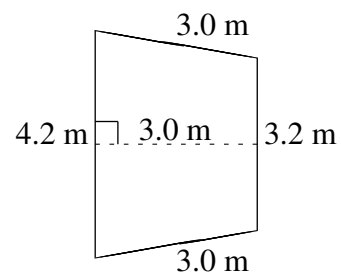
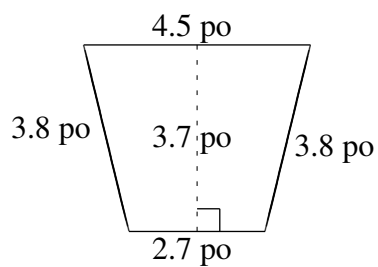
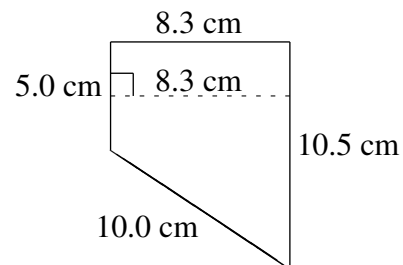
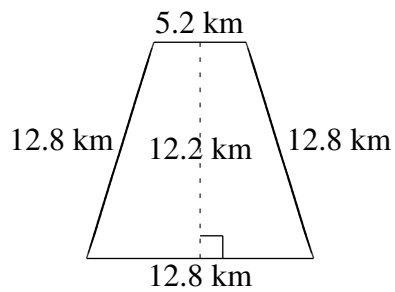
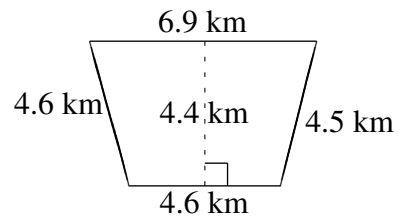
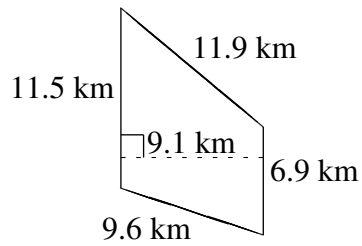


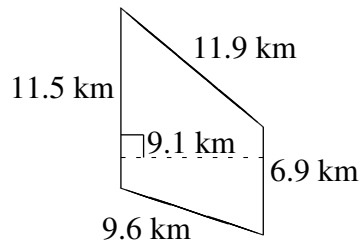
Aire et Périmètre de Trapèzes (E)

Trouvez l'aire et le périmètre de chaque trapèze.



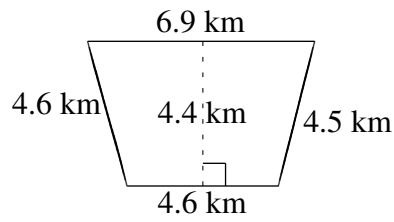
Aire et Périmètre de Trapèzes (E) Solutions

Trouvez l'aire et le périmètre de chaque trapèze.



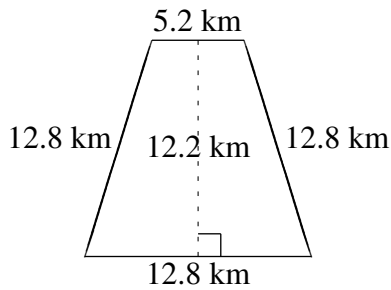
$$A = 83.72 \text{ km}^2$$

$$P = 39.9 \text{ km}$$



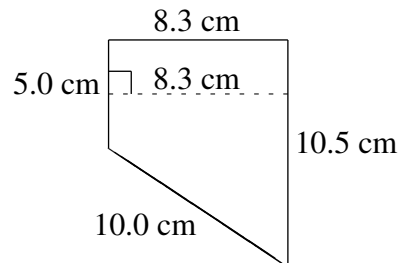
$$A = 25.30 \text{ km}^2$$

$$P = 20.6 \text{ km}$$



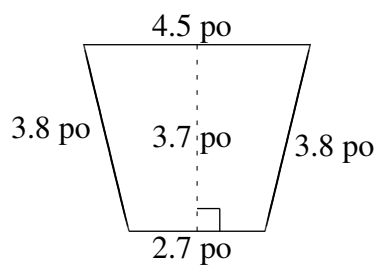
$$A = 109.80 \text{ km}^2$$

$$P = 43.6 \text{ km}$$



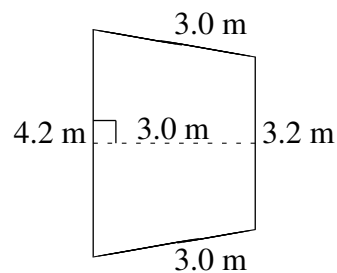
$$A = 64.325 \text{ cm}^2$$

$$P = 33.8 \text{ cm}$$



$$A = 13.32 \text{ po}^2$$

$$P = 14.8 \text{ po}$$



$$A = 11.10 \text{ m}^2$$

$$P = 13.4 \text{ m}$$