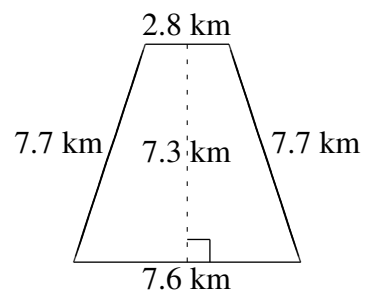
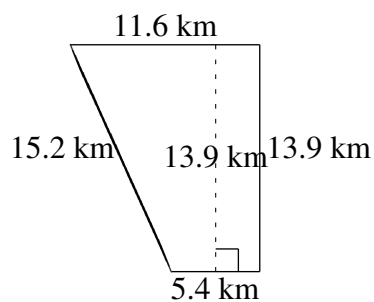
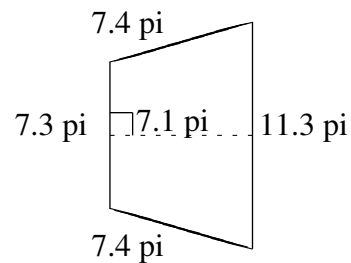
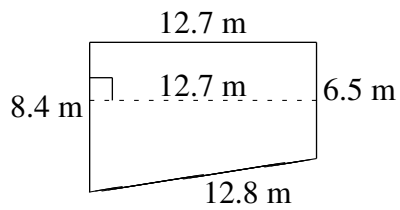
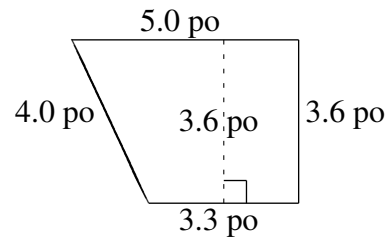
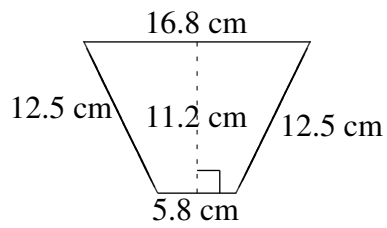


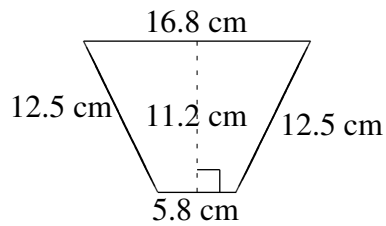
Aire et Périmètre de Trapèzes (B)

Trouvez l'aire et le périmètre de chaque trapèze.



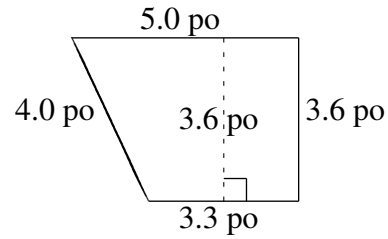
Aire et Périmètre de Trapèzes (B) Solutions

Trouvez l'aire et le périmètre de chaque trapèze.



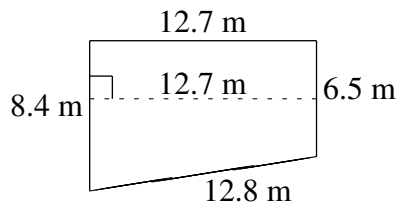
$$A = 126.56 \text{ cm}^2$$

$$P = 47.6 \text{ cm}$$



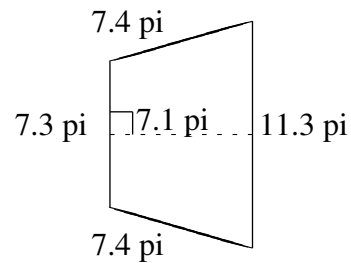
$$A = 14.94 \text{ po}^2$$

$$P = 15.9 \text{ po}$$



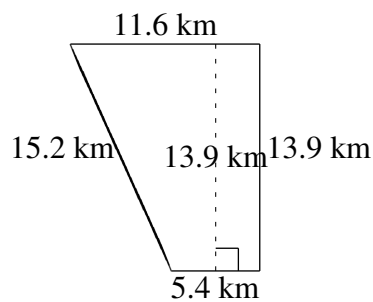
$$A = 94.615 \text{ m}^2$$

$$P = 40.4 \text{ m}$$



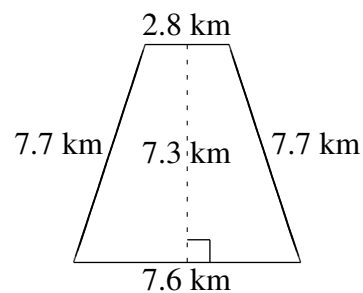
$$A = 66.03 \text{ pi}^2$$

$$P = 33.4 \text{ pi}$$



$$A = 118.15 \text{ km}^2$$

$$P = 46.1 \text{ km}$$



$$A = 37.96 \text{ km}^2$$

$$P = 25.8 \text{ km}$$