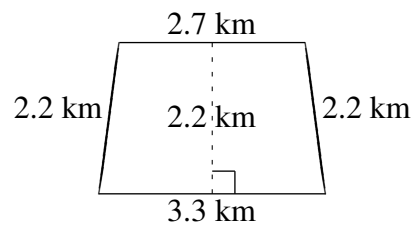
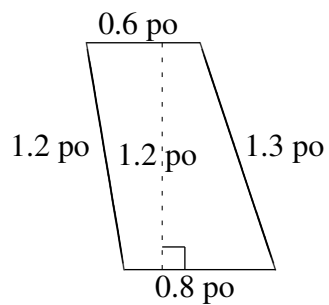
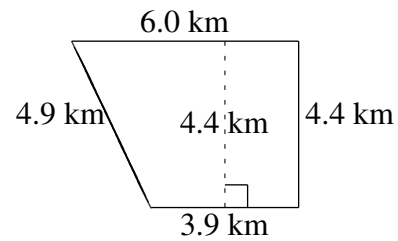
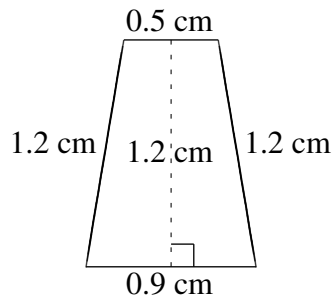
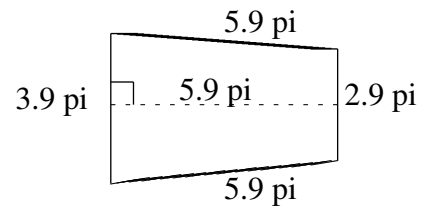
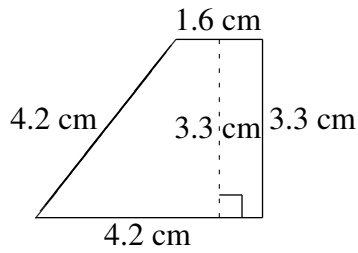


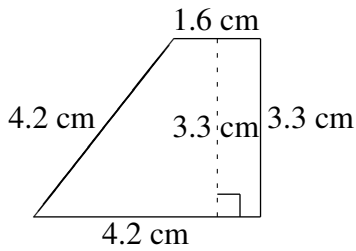
Aire et Périmètre de Trapèzes (J)

Trouvez l'aire et le périmètre de chaque trapèze.



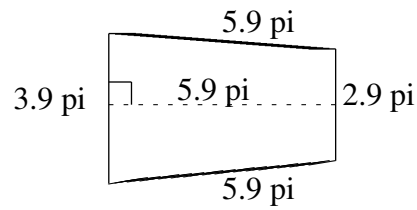
Aire et Périmètre de Trapèzes (J) Solutions

Trouvez l'aire et le périmètre de chaque trapèze.



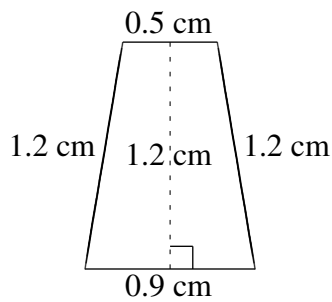
$$A = 9.57 \text{ cm}^2$$

$$P = 13.3 \text{ cm}$$



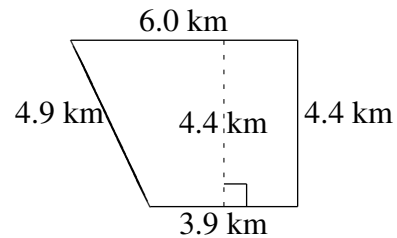
$$A = 20.06 \text{ pi}^2$$

$$P = 18.6 \text{ pi}$$



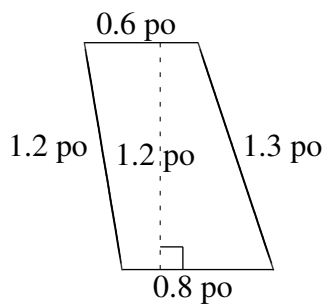
$$A = 0.84 \text{ cm}^2$$

$$P = 3.8 \text{ cm}$$



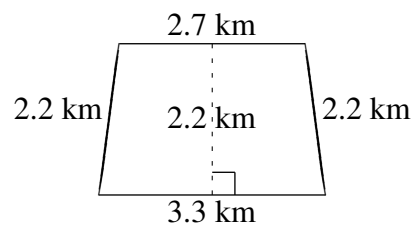
$$A = 21.78 \text{ km}^2$$

$$P = 19.2 \text{ km}$$



$$A = 0.84 \text{ po}^2$$

$$P = 3.9 \text{ po}$$



$$A = 6.60 \text{ km}^2$$

$$P = 10.4 \text{ km}$$