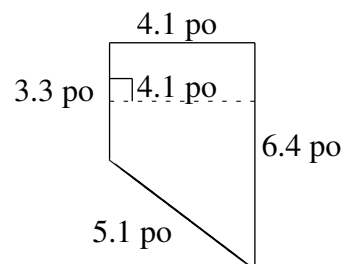
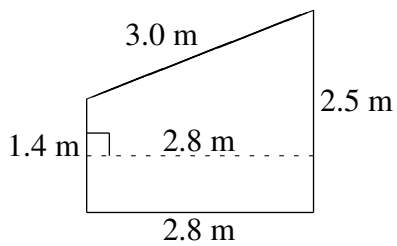
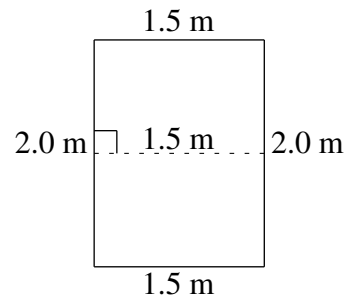
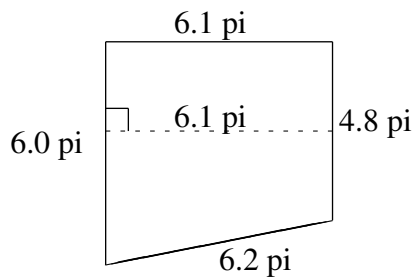
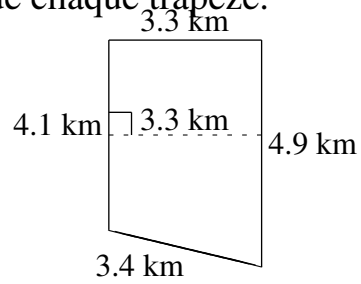
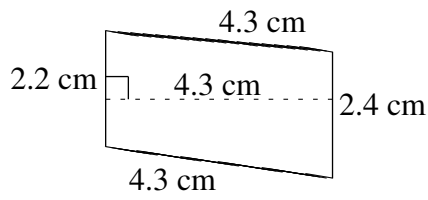


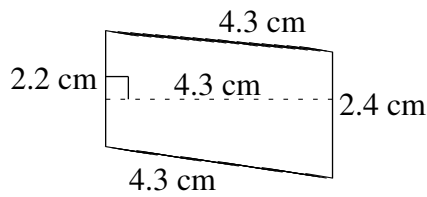
# Aire et Périmètre de Trapèzes (F)

Trouvez l'aire et le périmètre de chaque trapèze.



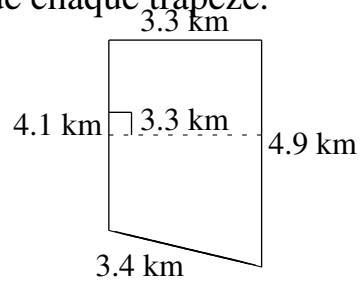
# Aire et Périmètre de Trapèzes (F) Solutions

Trouvez l'aire et le périmètre de chaque trapèze.



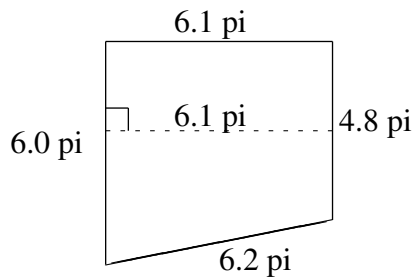
$$A = 9.89 \text{ cm}^2$$

$$P = 13.2 \text{ cm}$$



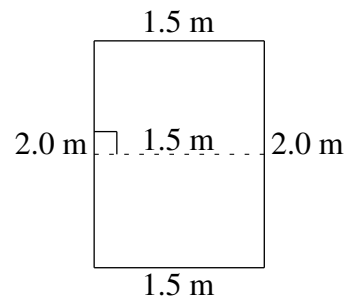
$$A = 14.85 \text{ km}^2$$

$$P = 15.7 \text{ km}$$



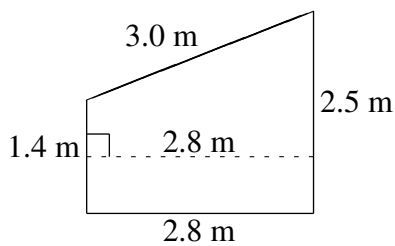
$$A = 32.94 \text{ pi}^2$$

$$P = 23.1 \text{ pi}$$



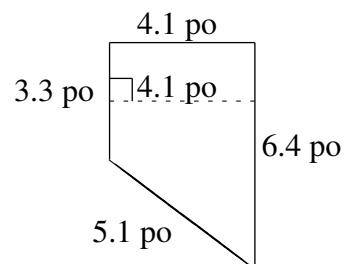
$$A = 3.00 \text{ m}^2$$

$$P = 7.0 \text{ m}$$



$$A = 5.46 \text{ m}^2$$

$$P = 9.7 \text{ m}$$



$$A = 19.885 \text{ po}^2$$

$$P = 18.9 \text{ po}$$