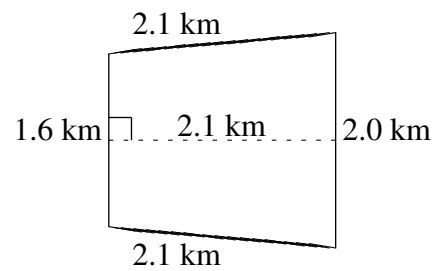
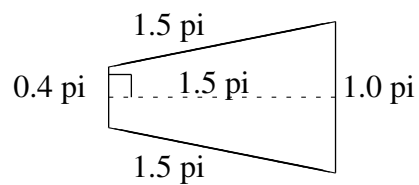
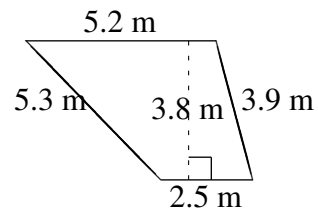
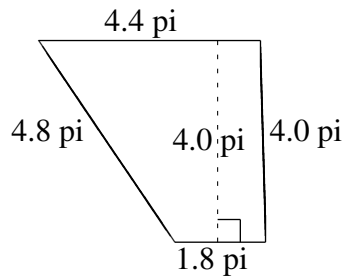
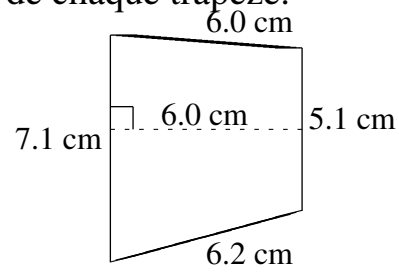
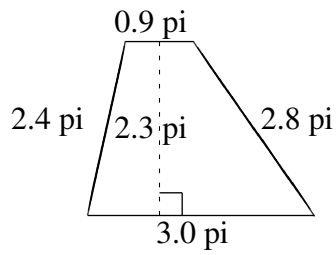


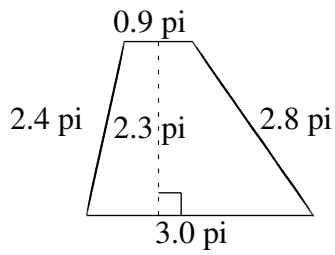
Aire et Périmètre de Trapèzes (D)

Trouvez l'aire et le périmètre de chaque trapèze.



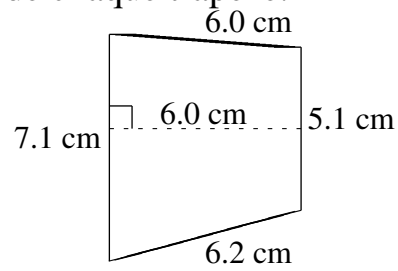
Aire et Périmètre de Trapèzes (D) Solutions

Trouvez l'aire et le périmètre de chaque trapèze.



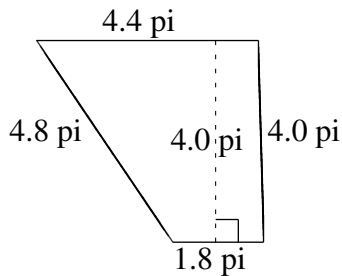
$$A = 4.485 \text{ pi}^2$$

$$P = 9.1 \text{ pi}$$



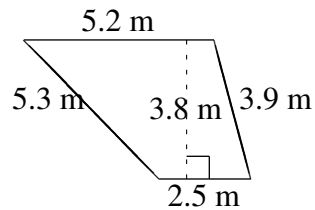
$$A = 36.60 \text{ cm}^2$$

$$P = 24.4 \text{ cm}$$



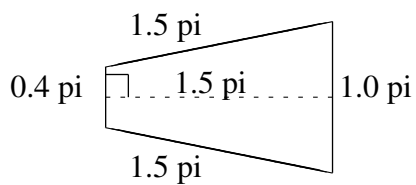
$$A = 12.40 \text{ pi}^2$$

$$P = 15.0 \text{ pi}$$



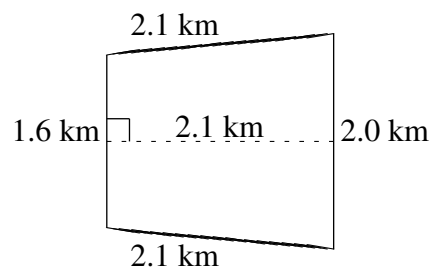
$$A = 14.63 \text{ m}^2$$

$$P = 16.9 \text{ m}$$



$$A = 1.05 \text{ pi}^2$$

$$P = 4.4 \text{ pi}$$



$$A = 3.78 \text{ km}^2$$

$$P = 7.8 \text{ km}$$