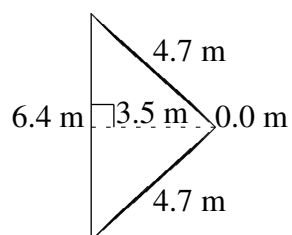
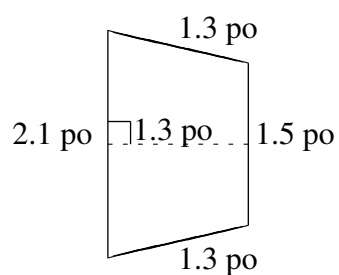
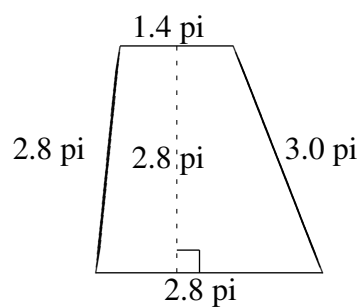
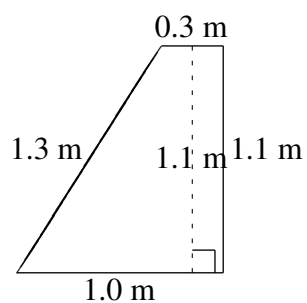
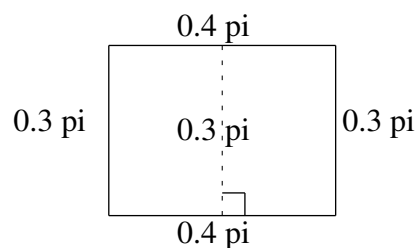
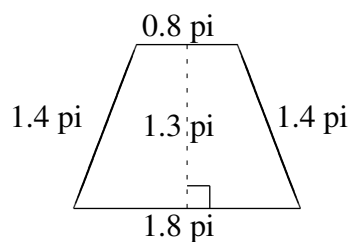


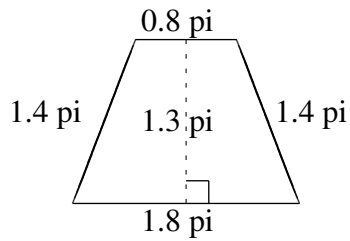
Aire et Périmètre de Trapèzes (G)

Trouvez l'aire et le périmètre de chaque trapèze.



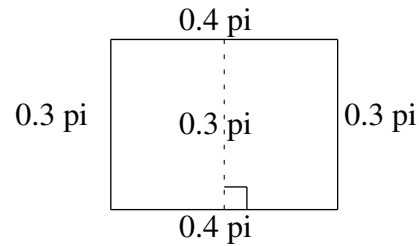
Aire et Périmètre de Trapèzes (G) Solutions

Trouvez l'aire et le périmètre de chaque trapèze.



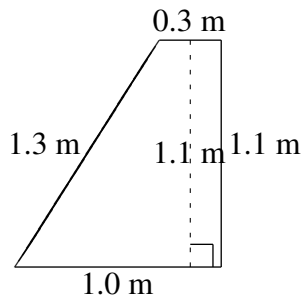
$$A = 1.69 \text{ pi}^2$$

$$P = 5.4 \text{ pi}$$



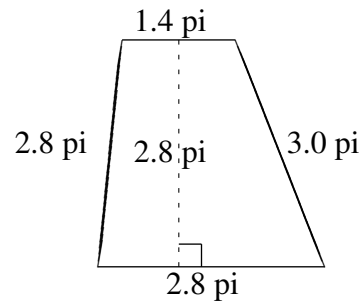
$$A = 0.12 \text{ pi}^2$$

$$P = 1.4 \text{ pi}$$



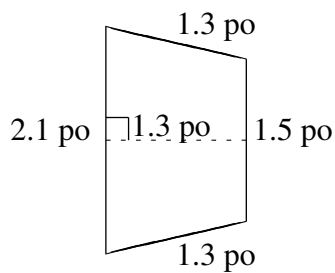
$$A = 0.715 \text{ m}^2$$

$$P = 3.7 \text{ m}$$



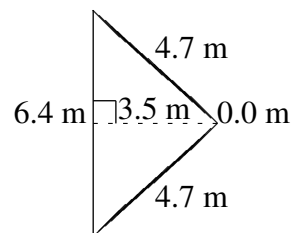
$$A = 5.88 \text{ pi}^2$$

$$P = 10.0 \text{ pi}$$



$$A = 2.34 \text{ po}^2$$

$$P = 6.2 \text{ po}$$



$$A = 11.20 \text{ m}^2$$

$$P = 15.8 \text{ m}$$