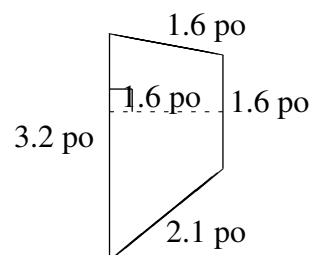
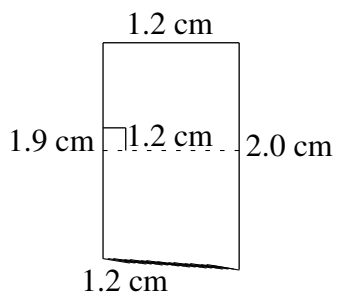
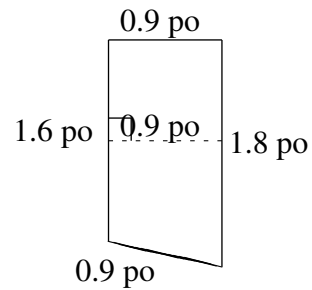
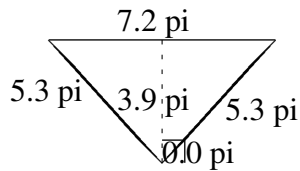
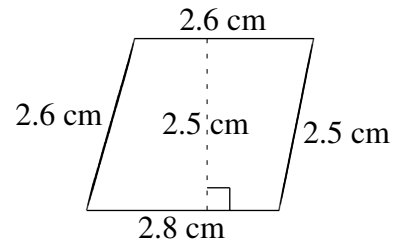
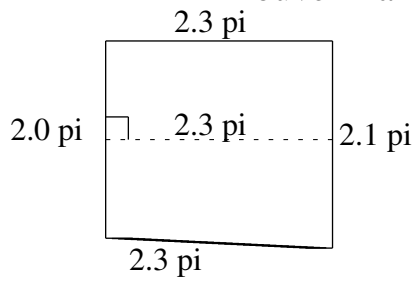


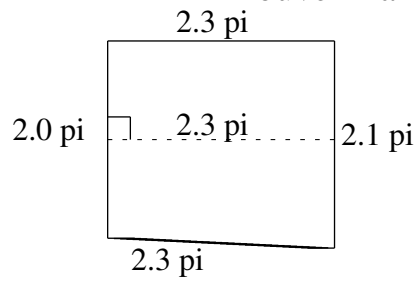
# Aire et Périmètre de Trapèzes (D)

Trouvez l'aire et le périmètre de chaque trapèze.



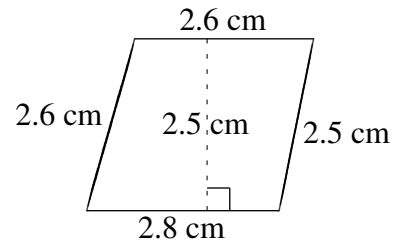
# Aire et Périmètre de Trapèzes (D) Solutions

Trouvez l'aire et le périmètre de chaque trapèze.



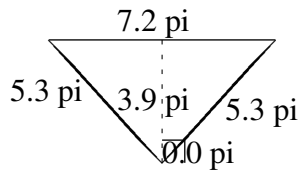
$$A = 4.715 \pi^2$$

$$P = 8.7 \pi$$



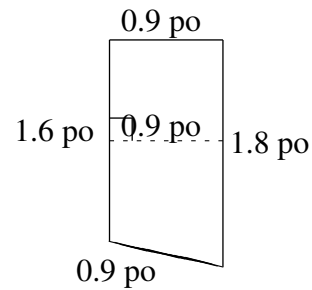
$$A = 6.75 \text{ cm}^2$$

$$P = 10.5 \text{ cm}$$



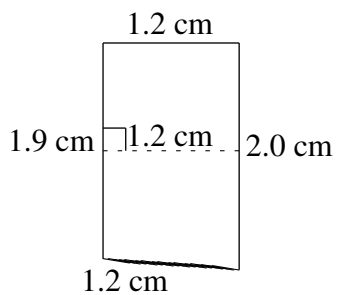
$$A = 14.04 \pi^2$$

$$P = 17.8 \pi$$



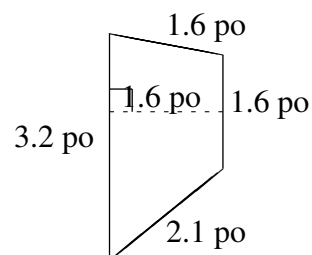
$$A = 1.53 \text{ po}^2$$

$$P = 5.2 \text{ po}$$



$$A = 2.34 \text{ cm}^2$$

$$P = 6.3 \text{ cm}$$



$$A = 3.84 \text{ po}^2$$

$$P = 8.5 \text{ po}$$