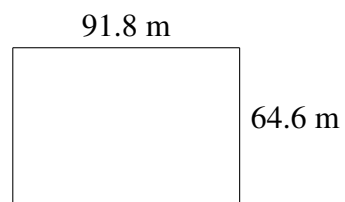
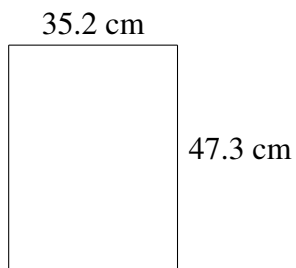
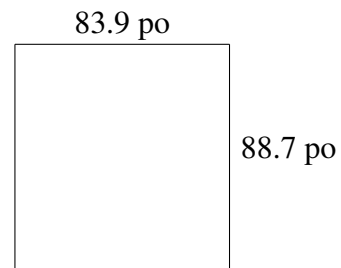
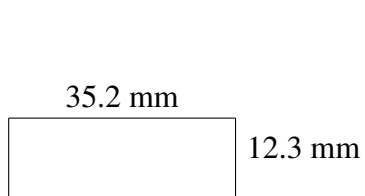
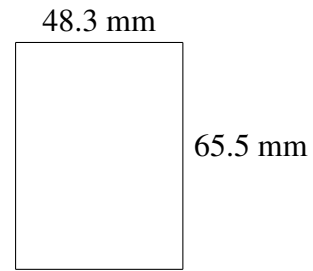
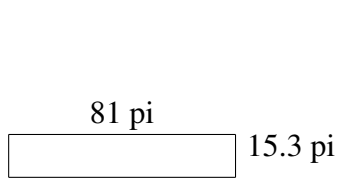


## Aire et Périmètre de Rectangles (F)

Trouvez l'aire et le périmètre de chaque rectangle.



# Aire et Périmètre de Rectangles (F) Solutions

Trouvez l'aire et le périmètre de chaque rectangle.

