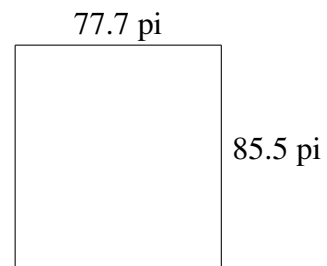
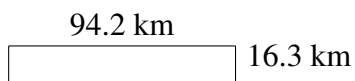
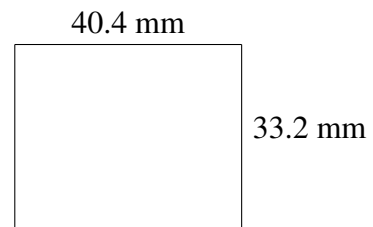
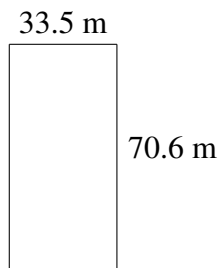
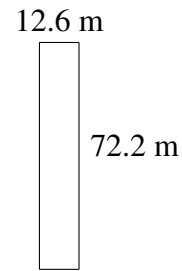
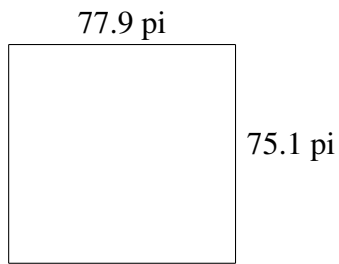


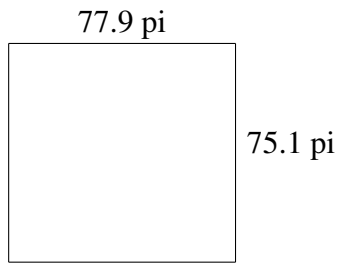
## Aire et Périmètre de Rectangles (C)

Trouvez l'aire et le périmètre de chaque rectangle.

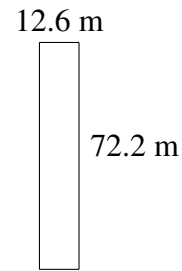


# Aire et Périmètre de Rectangles (C) Solutions

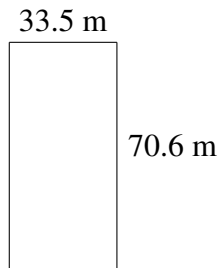
Trouvez l'aire et le périmètre de chaque rectangle.



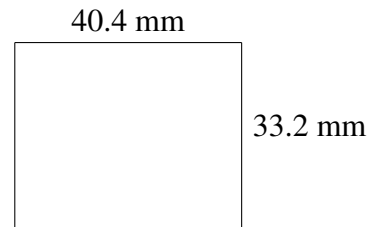
$$A = 5850.29 \text{ pi}^2$$
$$P = 306.0 \text{ pi}$$




$$A = 909.72 \text{ m}^2$$
$$P = 169.6 \text{ m}$$



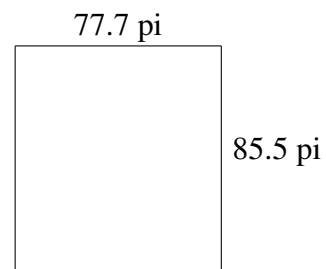
$$A = 2365.10 \text{ m}^2$$
$$P = 208.2 \text{ m}$$



$$A = 1341.28 \text{ mm}^2$$
$$P = 147.2 \text{ mm}$$



$$A = 1535.46 \text{ km}^2$$
$$P = 221.0 \text{ km}$$



$$A = 6643.35 \text{ pi}^2$$
$$P = 326.4 \text{ pi}$$