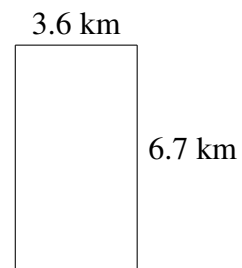
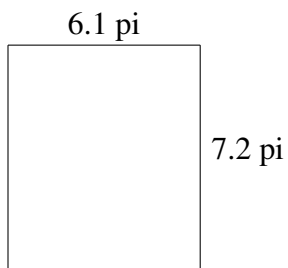
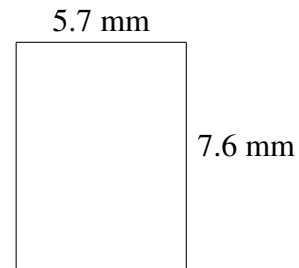
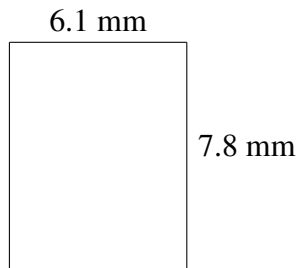
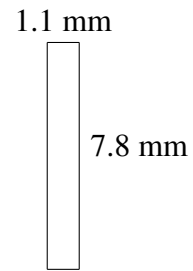
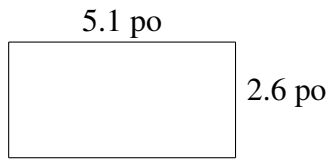


# Aire et Périmètre de Rectangles (G)

Trouvez l'aire et le périmètre de chaque rectangle.



# Aire et Périmètre de Rectangles (G) Solutions

Trouvez l'aire et le périmètre de chaque rectangle.

