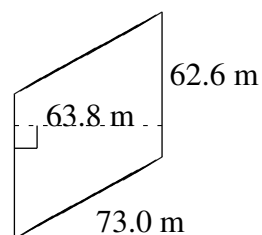
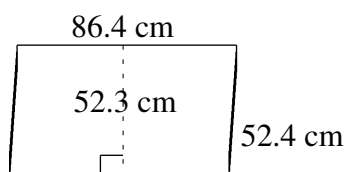
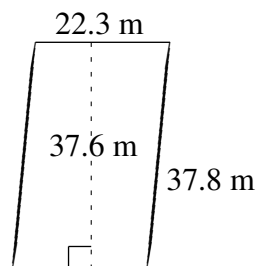
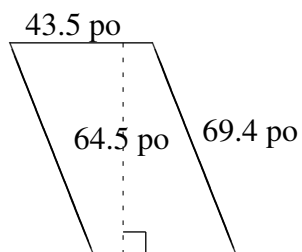
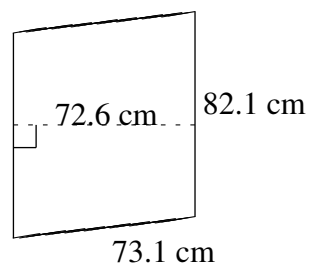
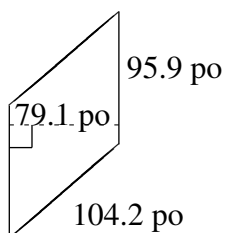


# Aire et Périmètre de Parallélogrammes (H)

Trouvez l'aire et le périmètre de chaque parallélogramme.



# Aire et Périmètre de Parallélogrammes (H) Solutions

Trouvez l'aire et le périmètre de chaque parallélogramme.

