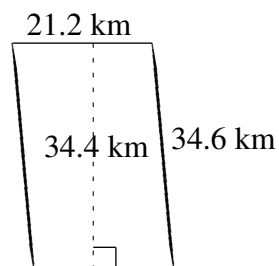
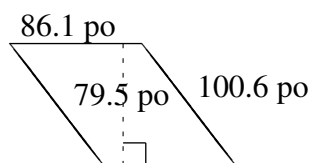
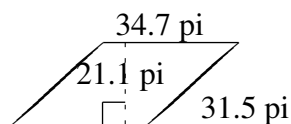
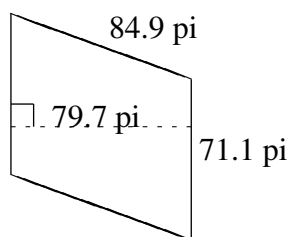
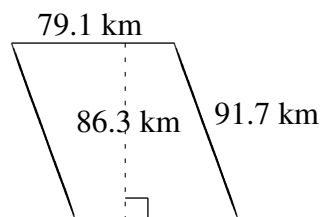
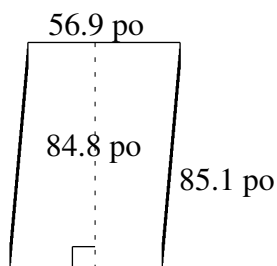


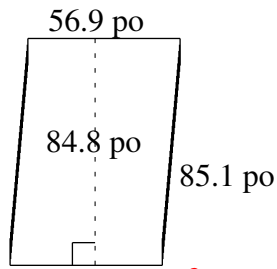
Aire et Périmètre de Parallélogrammes (G)

Trouvez l'aire et le périmètre de chaque parallélogramme.

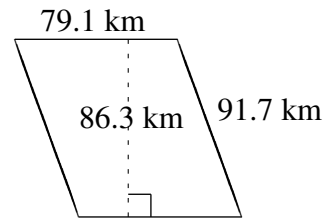


Aire et Périmètre de Parallélogrammes (G) Solutions

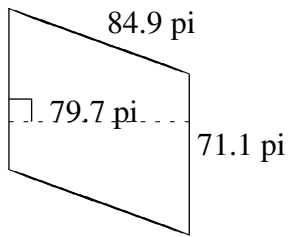
Trouvez l'aire et le périmètre de chaque parallélogramme.



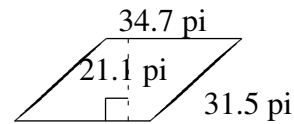
$$A = 4825.12 \text{ po}^2$$
$$P = 284.0 \text{ po}$$



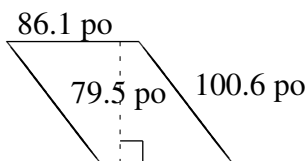
$$A = 6826.33 \text{ km}^2$$
$$P = 341.6 \text{ km}$$



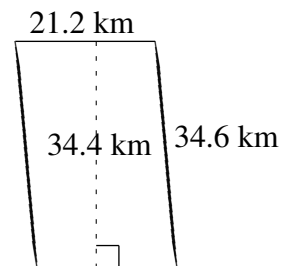
$$A = 5666.67 \text{ pi}^2$$
$$P = 312.0 \text{ pi}$$



$$A = 732.17 \text{ pi}^2$$
$$P = 132.4 \text{ pi}$$



$$A = 6844.95 \text{ po}^2$$
$$P = 373.4 \text{ po}$$



$$A = 729.28 \text{ km}^2$$
$$P = 111.6 \text{ km}$$