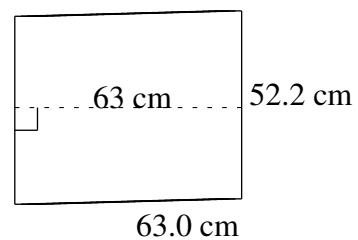
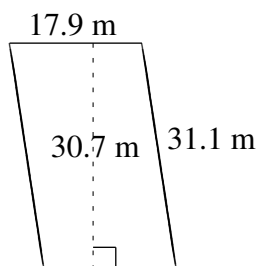
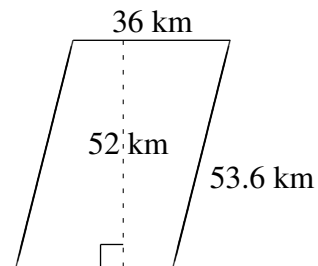
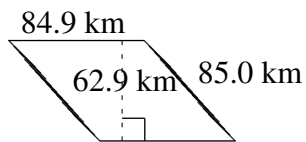
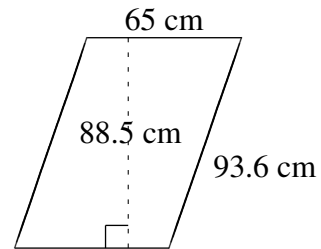
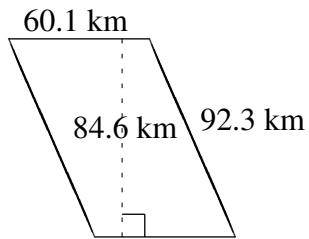


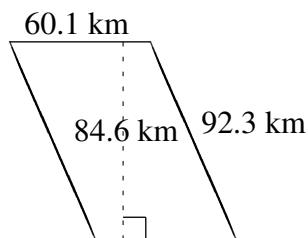
Aire et Périmètre de Parallélogrammes (E)

Trouvez l'aire et le périmètre de chaque parallélogramme.

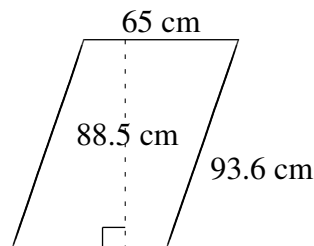


Aire et Périmètre de Parallélogrammes (E) Solutions

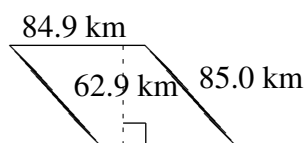
Trouvez l'aire et le périmètre de chaque parallélogramme.



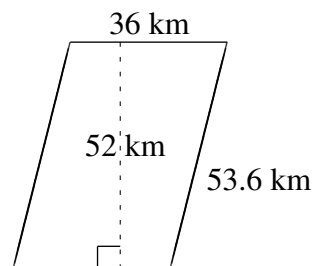
$$A = 5084.46 \text{ km}^2$$
$$P = 304.8 \text{ km}$$



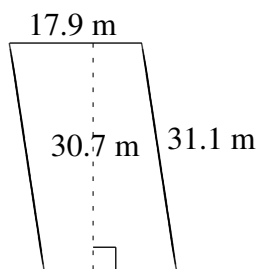
$$A = 5752.5 \text{ cm}^2$$
$$P = 317.2 \text{ cm}$$



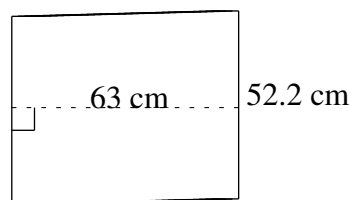
$$A = 5340.21 \text{ km}^2$$
$$P = 339.8 \text{ km}$$



$$A = 1872 \text{ km}^2$$
$$P = 179.2 \text{ km}$$



$$A = 549.53 \text{ m}^2$$
$$P = 98.0 \text{ m}$$



$$A = 3288.6 \text{ cm}^2$$
$$P = 230.4 \text{ cm}$$