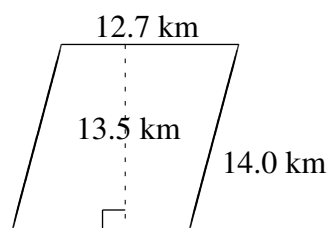
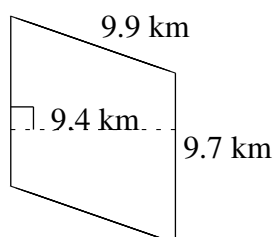
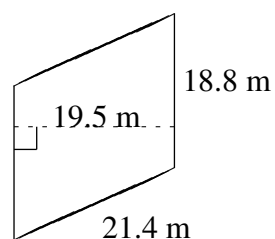
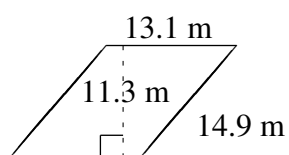
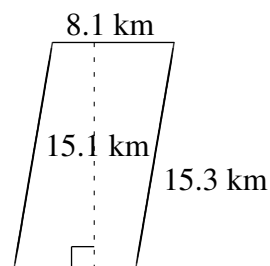
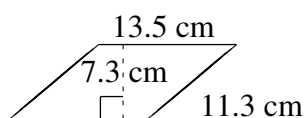


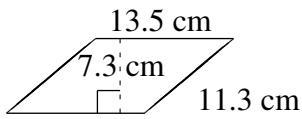
# Aire et Périmètre de Parallélogrammes (G)

Trouvez l'aire et le périmètre de chaque parallélogramme.

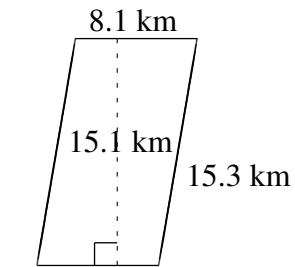


# Aire et Périmètre de Parallélogrammes (G) Solutions

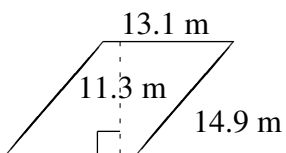
Trouvez l'aire et le périmètre de chaque parallélogramme.



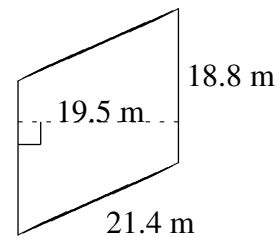
$$A = 98.55 \text{ cm}^2$$
$$P = 49.6 \text{ cm}$$



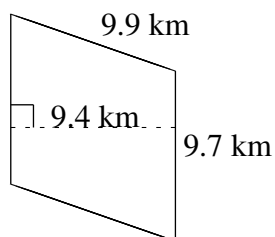
$$A = 122.31 \text{ km}^2$$
$$P = 46.8 \text{ km}$$



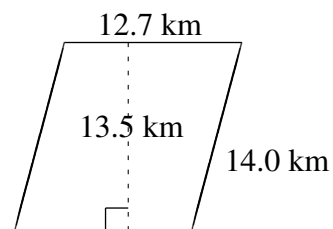
$$A = 148.03 \text{ m}^2$$
$$P = 56.0 \text{ m}$$



$$A = 366.60 \text{ m}^2$$
$$P = 80.4 \text{ m}$$



$$A = 91.18 \text{ km}^2$$
$$P = 39.2 \text{ km}$$



$$A = 171.45 \text{ km}^2$$
$$P = 53.4 \text{ km}$$