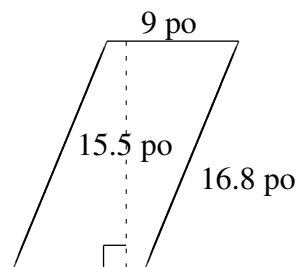
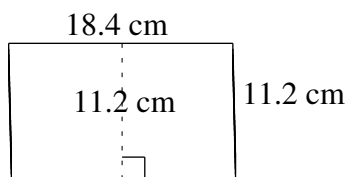
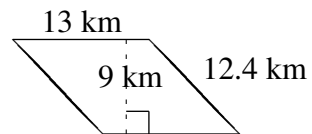
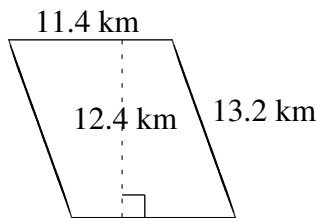
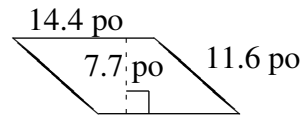
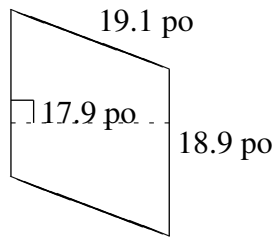


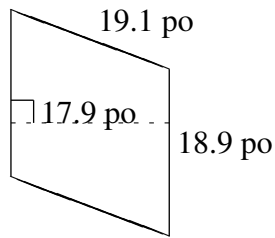
Aire et Périmètre de Parallélogrammes (E)

Trouvez l'aire et le périmètre de chaque parallélogramme.

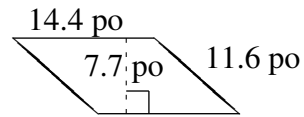


Aire et Périmètre de Parallélogrammes (E) Solutions

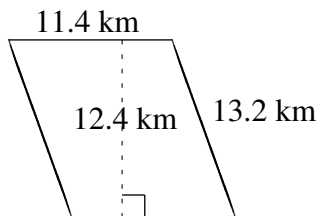
Trouvez l'aire et le périmètre de chaque parallélogramme.



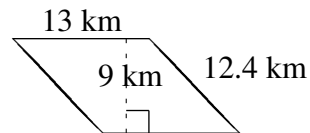
$$A = 338.31 \text{ po}^2$$
$$P = 76.0 \text{ po}$$



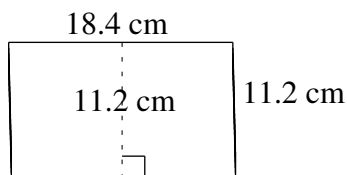
$$A = 110.88 \text{ po}^2$$
$$P = 52.0 \text{ po}$$



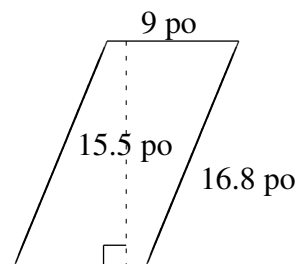
$$A = 141.36 \text{ km}^2$$
$$P = 49.2 \text{ km}$$



$$A = 117 \text{ km}^2$$
$$P = 50.8 \text{ km}$$



$$A = 206.08 \text{ cm}^2$$
$$P = 59.2 \text{ cm}$$



$$A = 139.5 \text{ po}^2$$
$$P = 51.6 \text{ po}$$